

# ST. MICHAEL'S SR SEC SCHOOL

3, Pusa Road, New Delhi – 110005

MODEL EXAM PAPER - TERM-2 2023- 24 CLASS II

SUB – ENGLISH

M.M: 50

Name: ..... Roll. No. .... Date: .....

## Part -A (Literature)

**Q1. Write the answers of the following questions:** **6**

a) Why did Varun not have dinner at Arif's house?

.....  
.....

b) What did Varun and Arif do together everyday?

.....  
.....

c) Who was Varun?

.....  
.....

d) Where was the bird hospital?

.....  
.....

e) Why did Karan stop at the first floor?

.....  
.....

f) What did Karan and Karim keep on the terrace?

.....  
.....

**Q.2 Write the meaning of these words: 2**

- a) tasty \_\_\_\_\_
- b) rocking \_\_\_\_\_
- c) wounds \_\_\_\_\_
- d) treated \_\_\_\_\_

**Q.3 Frame sentences from the words given: 3**

- a) spend - \_\_\_\_\_
- b) hugged - \_\_\_\_\_
- c) terrace - \_\_\_\_\_

**Q.4 Tick the correct answer: 1**

- 1) Varun and Arif played together \_\_\_\_\_
  - a) every day
  - b) every week
- 2) It happened during \_\_\_\_\_
  - a) winter last year
  - b) summer holidays

**Q.5 Write True or False. 1**

- a) Varun missed his mother. \_\_\_\_\_
- b) Karim lived on the second floor. \_\_\_\_\_

**Q.6 Who said these words? 2**

- a. What is in the bag? \_\_\_\_\_
- b. I missed you too. \_\_\_\_\_

c. Oh, the poor thing is hurt. \_\_\_\_\_

d. I have come to spend a lot of time with you. \_\_\_\_\_

### Part-B (Grammar)

**Q.7 Fill in the blanks with was or were** **3**

1. The students \_\_\_\_\_ swimming in the pool.
2. These \_\_\_\_\_ my books.
3. I \_\_\_\_\_ drinking coffee when the postman came.
4. Amit and Priya \_\_\_\_\_ absent yesterday.
5. Where \_\_\_\_\_ you last Saturday?
6. What \_\_\_\_\_ you doing?

**Q.8 Fill in the blanks with was or were +verb with ing.** **2**

1. The children \_\_\_\_\_ in the park when I saw them. (play)
2. I \_\_\_\_\_ the red light when the accident took place. (cross)
3. The boys \_\_\_\_\_ on the tree. (climb)
4. They \_\_\_\_\_ on their science project. (work)

**Q.9 Circle the adverbs in these sentences.** **2**

1. The soldiers fought bravely.
2. My father answered the call angrily.
3. We were extremely happy.
4. I met him recently at the mall.

**Q.10 Fill in the blanks with has, have or had.** **4**

1. My brother \_\_\_\_\_ many cars.
2. I \_\_\_\_\_ a bad dream last night.
3. Polar bear is white. It \_\_\_\_\_ thick fur.
4. I \_\_\_\_\_ two dogs and a cat.
5. Parul \_\_\_\_\_ a cold last week and she missed the school.
6. The students \_\_\_\_\_ fun watching the magician.
7. You \_\_\_\_\_ a pencil under your desk.
8. Mary \_\_\_\_\_ a new computer.

**Q.11 Change the given sentences into past.** **3**

- a) I am going to the park.
-

b) The old man is carrying a heavy bag.

---

c) Ronit and Ria are watching a movie.

---

**Q.12 Fill in the blanks with adverbs**

**2**

1. I woke up \_\_\_\_\_.
2. The sun shines \_\_\_\_\_.
3. She writes \_\_\_\_\_.
4. The children play \_\_\_\_\_.

**Q.13 Fill in the blanks with suitable conjunctions.**

**4**

1. He walked fast \_\_\_\_\_ missed the school bus.
2. Would you like apples \_\_\_\_\_ bananas?
3. I am happy \_\_\_\_\_ I got a new toy.
4. I have red shirt \_\_\_\_\_ blue pants.
5. I wanted to go outside \_\_\_\_\_ it started raining.
6. She enjoys learning English \_\_\_\_\_ she finds it difficult.
7. The lady was old \_\_\_\_\_ weak.
8. My mother cooked pasta \_\_\_\_\_ baked a cake.

**Q.14 Read the following unseen passage carefully and answer the questions given below the unseen passage:**

**5**

One day, a fox and his wife wanted to eat chicken. So, the fox silently went into a farmer's field nearby. He caught a chicken moving lonely and put it in his bag. A good monkey on a tree saw this. The monkey followed the fox. On his way home, the fox stopped at a lake to drink water, keeping the bag aside. The monkey silently released the chicken from the bag and put a pumpkin in its place. The fox reached home. His wife was heating water in a pot to boil the chicken. She took the bag and dumped it in the pot. Due to the pumpkin's weight, the pot was broken. The boiled water spilled over them and they got burned. After that, they never dared to steal.

a) What did the fox and his wife want to eat?

.....  
.....

b) Where did the fox catch the chicken?

.....

.....

c) **Who saw the fox catching the chicken?**

.....

.....

d) **Why did the fox stop at a lake?**

.....

.....

e) **Write any two action words from the passage.**

.....

**Q.15 Dictation**

**5**

**Q.16 Oral Exam**

**5**

# ST. MICHAEL'S SR SEC SCHOOL

3, Pusa Road, New Delhi – 110005

MODEL EXAM PAPER - TERM-2 2023- 24 CLASS II

SUB – HINDI

M.M: 50

Name: ..... Roll. No. .... Date: .....

(भाग क)

I. अपठित कहानी पढ़कर निम्नलिखित प्रश्नों के उत्तर लिखिए: 6

आज रानी पिकनिक पर जा रही है। वह चिड़ियाघर घूमने जा रही है। वह सभी जानवरों को देखने के लिए बहुत खुश है। रानी का पसंदीदा जानवर जिराफ़ है। वह उसकी लंबी गर्दन और धब्बों से प्यार करती है। रानी को उम्मीद है कि वह आज जिराफ़ों को खाना खिला पाएगी। वह तस्वीरें लेने के लिए अपना कैमरा साथ लेकर जा रही है।

प्रश्न -1: रानी कहाँ जा रही है ?

---

प्रश्न -2 : रानी पिकनिक पर कहाँ जा रही है ?

---

प्रश्न -3: रानी का पसंदीदा जानवर कौन सा है?.

---

प्रश्न4: रानी को जिराफ़ के बारे में क्या पसंद है?.

---





प्रश्न5: चिड़ियाघर में तस्वीरें लेने के लिए क्या ले कर जा रही है?

---

प्रश्न6: कहानी का शीर्षक लिखिए-

---

II. निम्नलिखित शब्दों के दो - दो पर्यायवाची शब्द लिखिए :4

1. 		
2. 		
3. 		
4. 		

III. निम्नलिखित शब्दों के विलोम शब्द लिखिए: 4

1. कठोर	
2. वीर	
3. मित्र	
4. आना	
5. पाप	
6. अच्छा	
7. पास	
8. काला	

IV. निम्नलिखित वाक्यों में क्रिया के नीचे रेखा खींची: 3

- घोड़ा घास खा रहा है।
- दादी स्वेटर बुन रही है।
- राजू पढाई कर रहा है।
- माँ जलेबी बना रही है।
- रमा दौड़ रही है।
- पलक निबंध लिख रही है।



## V. दिए गए वाक्यों में से विशेषण शब्दों के नीचे रेखा कीजिए: 3

- प्रिया ने लाल चूड़ियां पहनी है।
- मोहन का घर बहुत बड़ा है।
- सैम की साइकिल काले रंग की है।
- पलक का कुत्ता काले रंग का है।
- शालू बहुत होशियार लड़की है।
- राधा के बाल बहुत काले और लंबे है।

## VI. नीचे दिए गए वाक्यों में से विशेषण और विशेष्य छाँटकर लिखिए: 5

1. ललित घंमडी है।
2. मोर के पंख रंग-बिरंगे होते हैं।
3. मेरे बस्ती में चार पुस्तक हैं।
4. लाल से सेब मीठे होते हैं।
5. प्रिया ने लाल चूड़ियां पहनी है।

विशेषण	विशेष्य
1.	
2.	
3.	
4.	
5.	

## भाग (ख)

VII. निम्नलिखित शब्दों के अर्थ लिखिए: 3

1. प्रणाम -
2. इंतजार -
3. एकत्रित -
4. आवश्यकता -
5. बंटवारा -
6. मित्र -

VIII. खाली स्थान भरिए: 3.

1. एक दिन \_\_\_\_\_ बीमार हो गई।
2. लोग \_\_\_\_\_ के चारों ओर चक्कर लगाते हैं।
3. \_\_\_\_\_ लकड़ी का काम करता है।
4. धोबी ने चमकू को \_\_\_\_\_ दिया।
5. \_\_\_\_\_ पंजाबियों का प्रिय त्योहार है।
6. पेड़ पौधे हमारे सच्चे \_\_\_\_\_ होते हैं।

XI. गलत वाक्य के सही उत्तर लिखिए: 3

1. कौवा बहुत ही परिश्रमी था।
- 

2. चमकू धरती पर साइकिल से आया।
- 

3. लोहड़ी का त्योहार मनाने के लिए प्रियांशी दिल्ली गई।
-

X. नीचे दिए गए वाक्य किसने, किसे कहें ? 2

1. तुम कौन हो और कहां से आए हो।

---

हम राजीव अंकल की पहली लोहड़ी मनाने गए थे।

---

IX. निम्नलिखित प्रश्नों के उत्तर लिखिए: 4.

लोहड़ी का त्योहार क्या संदेश देता है?

---

---

---

गिलहरी ने अकेले ही फसल क्यों काटी ?

---

---

---

चमपू को किस चीज का शौक था ?

---

4 .बीज लेकर कौन आया ?

---

---

---

श्रुतलेखः

5

ORAL :

5

# ST. MICHAEL'S SR SEC SCHOOL

3, Pusa Road, New Delhi – 110005

MODEL EXAM PAPER - TERM-2 2023- 24 CLASS II

SUB – MATHS

M.M: 50

Name: ..... Roll. No. .... Date: .....

I. Logic and Beyond :


10



1. How many houses are there in the brown field ? \_\_\_\_\_



2. Write the numbers of lady bird \_\_\_\_\_



3. Is it an equal group of flowers? (yes / no )

4. A week has 7 days . How many days are there in 15 weeks ?

5. Seema has 136 marbles . She collects 150 more marbles . How many marbles she have altogether?

6. If  $\triangle = 10$ , then  $\triangle \triangle \triangle$

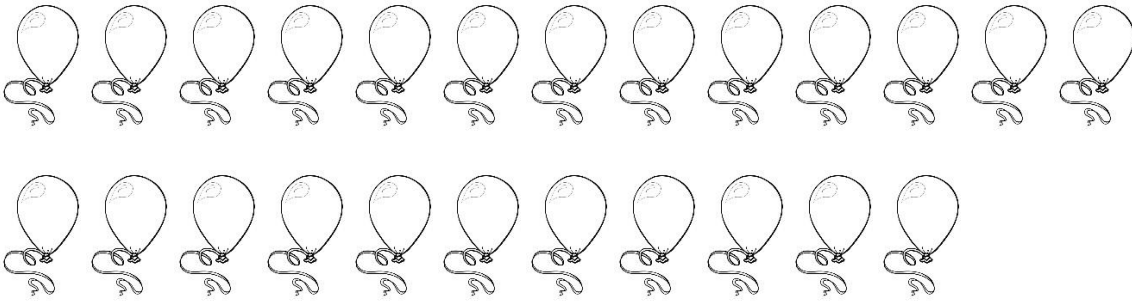
7. By how much is 480 more than 380 ?

8. There 765 apples in a shop. 650 apples are sold. How many are left?

9. Find out the next number :



10. \_\_\_\_\_ equal groups of 6 balloons can be formed from the given balloons.



II. Multiply by using the number line:

1

A).  $4 \times 5 =$

B)  $2 \times 6 =$

III. Write the multiplication fact and answer for the following:

2

A)  $4 + 4 + 4 + 4 + 4 + 4 =$  \_\_\_\_\_  $=$  \_\_\_\_\_

B)  $6 + 6 + 6 + 6 + 6 =$  \_\_\_\_\_  $=$  \_\_\_\_\_

III) Write the addition fact and answer for the following:

2

A.  $4 \times 6 =$  \_\_\_\_\_  $=$  \_\_\_\_\_

B.  $8 \times 3 =$  \_\_\_\_\_  $=$  \_\_\_\_\_

IV . Solve:

2

1.  $\begin{array}{r} 67 \\ \times 6 \\ \hline \end{array}$

2.  $\begin{array}{r} 45 \\ \times 4 \\ \hline \end{array}$

3.  $\begin{array}{r} 86 \\ \times 5 \\ \hline \end{array}$

4.  $\begin{array}{r} 75 \\ \times 7 \\ \hline \end{array}$

\_\_\_\_\_

\_\_\_\_\_

\_\_\_\_\_

\_\_\_\_\_

**V. Divide by repeated subtraction:**

**2**

<p><b>A. <math>30 \div 3 =</math></b></p>	<p><b>B. <math>48 \div 6 =</math></b></p>
---	---

**VI. Write division facts:**

**2**

<p><b>A. <math>9 \times 4 = 36</math></b></p>	<p><b>B. <math>8 \times 7 = 56</math></b></p>
---	---

**VII. Write multiplication facts:**

**2**

<p><b>A) <math>15 \div 3 = 5</math></b></p>	<p><b>B ) <math>30 \div 6 = 5</math></b></p>
---	--

VIII. Write Dividend , Divisor and Quotient for each division fact:

3

Division Fact	Dividend	Divisor	Quotient
$63 \div 7 = 9$			
$90 \div 9 = 10$			

IX. Long Division:

4

A. $27 \div 9 =$	B. $50 \div 5 =$
------------------	------------------

SOLVE :

2

$$\begin{array}{r} 71 \\ - 49 \\ \hline \\ \hline \end{array}$$

$$\begin{array}{r} 89 \\ + 15 \\ \hline \\ \hline \end{array}$$

$$\begin{array}{r} 52 \\ - 25 \\ \hline \\ \hline \end{array}$$

$$\begin{array}{r} 37 \\ + 54 \\ \hline \\ \hline \end{array}$$



1. If a teacher has 40 students and wants to divide them into groups of 8, how many groups will there be?
2. A pizza has 16 slices and you want to divide it between 4 people, how many slices will each person get?
3. Sarah ran for 31 minutes, had a break for 5 minutes, then ran for 18 more minutes. How long did she for? \_\_\_\_\_

4. Tanya has 30 cookies. She gave 5 to her sister and keeps 5 for herself. How many does she have to share with her friends?

5. There are 47 students in a class. 9 of them are absent today. How many students are present?





A cake is cut into 12 pieces. If each person eats 3 pieces, how many people can the cake feed?


If a baker makes 16 cupcakes and each cupcake has 2 cherries on top, how many cherries are used in total?

Look at the pictograph and answer the questions.

2

Gift Mary's Children Received On Christmas

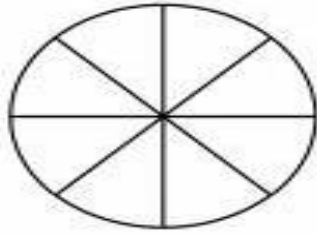
Child	Gifts	Number of gifts
Ben		
Sandy		
Ted		
John		

Key :  = 2 gifts

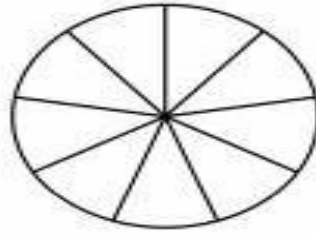
1. Who received the least (less) gifts ? \_\_\_\_\_
2. How many gifts did Ted receive ? \_\_\_\_\_
3. Who received the more gifts ? \_\_\_\_\_
4. How many more gifts did Sandy receive than Ted \_\_\_\_\_

### Color the fraction circle

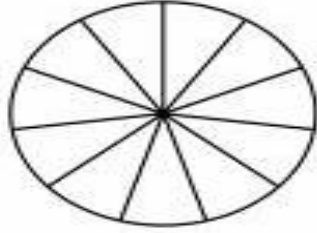
$$\frac{7}{8} =$$



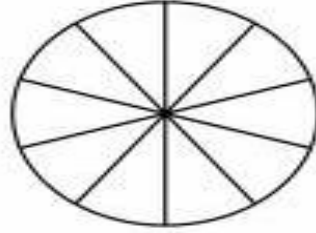
$$\frac{5}{9} =$$



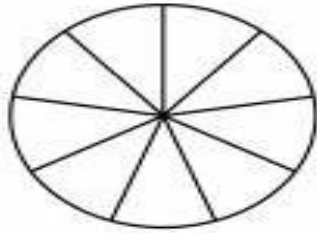
$$\frac{4}{11} =$$



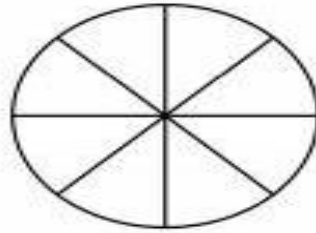
$$\frac{5}{10} =$$



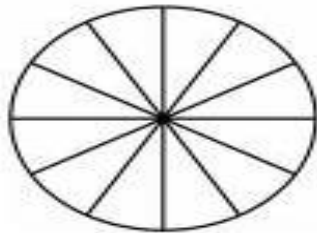
$$\frac{1}{9} =$$



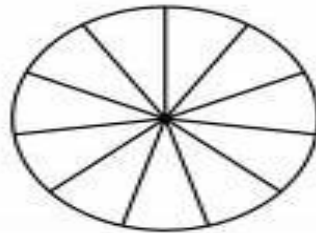
$$\frac{1}{8} =$$



$$\frac{5}{12} =$$



$$\frac{5}{11} =$$



# ST. MICHAEL'S SR SEC SCHOOL

3, Pusa Road, New Delhi – 110005

MODEL EXAM PAPER(TERM II) 2023- 24 CLASS II

SUB – EVS

MM 50

.....  
NAME \_\_\_\_\_ ROLL NO. \_\_\_\_\_

**Q1 Give the term: (7)**

- 1) The main source of water on earth is \_\_\_\_\_
- 2) The water that goes deep into the ground is \_\_\_\_\_
- 3) Transport used on water is called \_\_\_\_\_
- 4) Capital of India \_\_\_\_\_
- 5) Holy book of muslims \_\_\_\_\_
- 6) Big ball of fire that gives us heat and light \_\_\_\_\_
- 7) The family of eight planets sun moon and stars \_\_\_\_\_

**Q2 Give examples off (4)**

- I. Land transport \_\_\_\_\_
- II. Air transport \_\_\_\_\_
- III. Places of worship \_\_\_\_\_
- IV. Means of communication \_\_\_\_\_

**Q3 Name the following:**

**(13)**

**1) Slowest means of transport**

\_\_\_\_\_

**2) Biggest means of Land transport**

\_\_\_\_\_

**3) Vehicle with three wheels**

\_\_\_\_\_

**4) Audio visual medium through which messages**

**can be given to people at the same time**

\_\_\_\_\_

**5) Fastest means of communication**

\_\_\_\_\_

**6) Father of the nation**

\_\_\_\_\_

**7) Festival of lights**

\_\_\_\_\_

**8) The holy month in which muslims fast**

\_\_\_\_\_

**9) Festival that marks the victory of good over evil**

\_\_\_\_\_

**10)Biggest harvest festival of kerala that last for ten days**

\_\_\_\_\_

**11)Holy book of Christians**

\_\_\_\_\_

**12)The red planet**

\_\_\_\_\_

**13)Planet on which we live**

\_\_\_\_\_

**Q4 Answer the following questions**

**1) What are the uses of the sun? (2)**

---

---

---

---

**2) Write a short note on the festival Onam? (4)**

---

---

---

---

**3) Write a short note on Christmas (4)**

---

---

---

---

**4) Write a short note on national emblem (3)**

---

---

---

---

**5) How is air pollution Caused?**

**(2)**

---

---

---

---

**Q5 Draw the water cycle and explain it.**

**(7)**

---

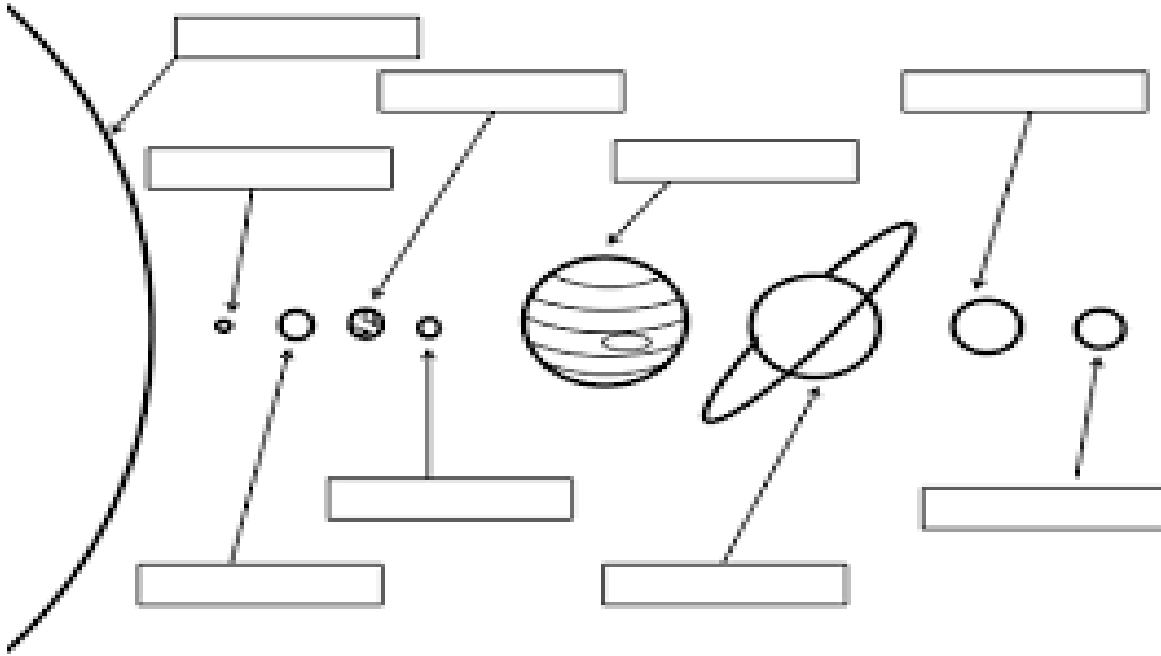
---

---

---

Q6 Complete the solar system by writing the names of the planets and colouring them.

(4)





# **ST. MICHAEL'S SR SEC SCHOOL**

**3, Pusa Road, New Delhi – 110005**

**MODEL EXAM PAPER : Term II 2023-24 CLASS – II**

**SUB – COMPUTER**

Name : \_\_\_\_\_ Roll. No. : \_\_\_\_\_ Date : \_\_\_\_\_

**Q1 : Write any 2 features of a computer. (2)**

---

---

---

**Q2 : Write any 2 disadvantages of a computer. (2)**

---

---

---

**Q4 : Name 4 the types of AI (2)**

1. \_\_\_\_\_

3. \_\_\_\_\_

2. \_\_\_\_\_

4. \_\_\_\_\_

**Q5 : Give 1 use of :**

**(2)**

**1. Printer :** \_\_\_\_\_

\_\_\_\_\_

**2. Speaker :** \_\_\_\_\_

\_\_\_\_\_

**Q5 : Name 4 the types of AI**

**(2)**

**5.** \_\_\_\_\_

**6.** \_\_\_\_\_

**7.** \_\_\_\_\_

**8.** \_\_\_\_\_

**Q6 : Fill in the blanks.**

**(5)**

Smartphone    electronic    smart speaker    scanner    algorithms

1. **Computer is an \_\_\_\_\_ device.**
2. **\_\_\_\_\_ is used to scan pictures.**
3. **Artificial intelligence is a set of \_\_\_\_\_.**
4. **A \_\_\_\_\_ is a device that accepts our voice commands to play music.**
5. **\_\_\_\_\_ combines the function of a mobile phone and a computing device.**

**Q7 : Give the full form of :**

**(1)**

**UPS : \_\_\_\_\_**

**Q7 : Write 2 differences between**

**(4)**

<b>A Computer</b>	<b>A Human Being</b>
<b>1.</b>	<b>1.</b>
<b>2.</b>	<b>2.</b>

**Q8 : True or False :**

**(3)**

1. A computer commits mistakes. \_\_\_\_\_
2. Floppy disk was used earlier, instead of a CD or Pen Drive. \_\_\_\_\_
3. Theory of mind is a type of AI. \_\_\_\_\_
4. Limited memory is not a type of AI. \_\_\_\_\_
5. AI can predict earthquakes and volcanoes. \_\_\_\_\_
6. A computer takes decision on its own. \_\_\_\_\_

**Q9 : Rearrange the letters:**

**(2)**

1. MARTS TV : \_\_\_\_\_
2. RADH SKID : \_\_\_\_\_
3. IRTREPN : \_\_\_\_\_
4. XLEAA : \_\_\_\_\_

# **ST. MICHAEL'S SR SEC SCHOOL**

**3, Pusa Road, New Delhi – 110005**

**MODEL EXAM PAPER : Term II 2023-24 CLASS – II**

**SUB – MORAL SCIENCE**

---

Name : \_\_\_\_\_ Roll. No. : \_\_\_\_\_ Date : \_\_\_\_\_

**Q1 : Who took care of Adya when she came from the school? (1)**

---

---

**Q2 : Why did Adya's grandfather not eat lunch that day? (2)**

---

---

**Q3 : What did the rabbit say to the elephant? (2)**

---

---

**Q4 : What did the fox say to the elephant? (1)**

---

---

**Q5 : Name the 2 boys in the story. (1)**

---

---

**Q6 : Name the birds flying in the sky. (1)**

---

---

---

**Q7 : Who demanded that the swan belonged to him? (1)**

---

---

**Q8 : Write any 2 moral values which you think one should have? (2)**

---

---

---

---

**Q9 : Write 2 things about what you should do to take care of your favourite toys. (2)**

---

---

---

---

**Q10 : write the word meaning of the following : (4)**

1. Gobble : \_\_\_\_\_

2. Injured : \_\_\_\_\_

3. Appreciate : \_\_\_\_\_

4. Nursed : \_\_\_\_\_

**Q11 : Which toy said this? (2)**

1. Let's all run away from here. \_\_\_\_\_

2. Adya twists my hand and it really hurts. \_\_\_\_\_

**Q12 : Write the sound of the animal. (4)**

1. Pigs : \_\_\_\_\_

2. Bees : \_\_\_\_\_

3. Duck : \_\_\_\_\_

4. Dog : \_\_\_\_\_

**Q13 : Fill in the blanks.**

(2)

1. A swan was hit and fell \_\_\_\_\_ to the ground.

2. Prince Siddharth gently \_\_\_\_\_ the arrow and  
carefully \_\_\_\_\_ the swan back to life.

# **ST. MICHAEL'S SR SEC SCHOOL**

**3, Pusa Road, New Delhi – 110005**

**MODEL EXAM PAPER : Term II 2023-24 CLASS – II**

**SUB – G.K.**

---

Name : \_\_\_\_\_ Roll. No. : \_\_\_\_\_ Date : \_\_\_\_\_

**Q1 : Give one Word. (5)**

1. National song of India. \_\_\_\_\_

2. National bird of India. \_\_\_\_\_

3. National tree of India. \_\_\_\_\_

4. The thinking part of our body. \_\_\_\_\_

5. It helps us to taste. \_\_\_\_\_

**Q2 : Name them : (5)**

1. The largest bird. \_\_\_\_\_

2. The tallest animal. \_\_\_\_\_

3. The fastest animal. \_\_\_\_\_

4. I helps in digestion and making refreshing drinks in summer.

\_\_\_\_\_

5. I am of white colour and is used in soups and pizza toppings.

\_\_\_\_\_



**Q3 : Match the helpers with their tool.**

**(2)**

The image shows a matching exercise. On the left side, there are five illustrations of helpers: a construction worker with a hard hat and tools, a police officer in uniform, a woman operating a sewing machine, a cleaner with a broom, and a mechanic with a wrench. On the right side, there are five illustrations of tools: a red dustpan, a screwdriver and wrench crossed, a yellow power drill, a handgun with bullets, and a yellow sewing machine. A red line connects the construction worker to the power drill.

**Q4 :**

**Name any 4 water animals.**

**(4)**

1. \_\_\_\_\_

2. \_\_\_\_\_

3. \_\_\_\_\_

4. \_\_\_\_\_


**Q5 : Name the famous food of the following countries. (1.5)**

1. Japan : \_\_\_\_\_

2. Mexico : \_\_\_\_\_

3. China : \_\_\_\_\_

**Q5 : Spot 10 the difference in the picture. (5)**



Q6 : Find the odd one out :

(2.5)

