

ST. MICHAEL'S SR SEC SCHOOL

3, Pusa Road, New Delhi – 110005

MODEL TEST PAPERS 2025 –26 CLASS II

TIME : 2 HOURS

SUB – ENGLISH

M.M. : 50

Name : Roll. No. Date :

Q1. Write names of Rahat's friends: 4

1. loves pink cakes _____
2. wants to be ballerina _____
3. has got fluffy kittens _____
4. sings in the school choir _____

Q2. Answer the following questions : 8

1. What do both Rahat and Sheela have ?

.....
.....

2. When is Rahat's birthday ?

.....
.....

3. Where did Tina's toy run away ?

.....
.....

4. What did Tina say to her toys in Toyland ?

.....
.....

Q3. Frame sentences : 3

1. sitting.....

2. asleep.....

3. learnt.....

Q4. Write the meanings of the following words : **2**

1. tap

2. crash

3. careless.....

4. choir

Q5. Punctuate the following phrases : **3**

1. Are you hungry

2. We need a new rug

3. We just got here

4. Yippee

5. When will you be there

6. Ohhh.....

Q6. Write the antonyms of the following : **4**

Wet

Buy

Beautiful

Cheap

Light

Heavy

Cry

Difficult

Q7. Write the synonyms of the following : **4**

Unhappy

Big

Sick

Pretty

Q8. Fill in the blanks with correct conjunctions : **3**

1. Kim is here lion is not here.

2. Do you want Pizza Salad ?

3. Anna wake early she went to school .

4. **Tobby is a dogGeorge is a cat .**

5. **I just had coffeeI am sleepy .**

6. **I like to eat apples oranges .**

Q9. Write any six lines on Republic Day .

3

.....

.....

.....

.....

.....

.....

.....

Q10. Underline the prepositions :

3

1. **The mouse is in the hole .**

2. **John is waiting at the door .**

3. **I like to write with a pencil .**

Q11. Fill in the blanks with pronouns :

3

1. **..... is a dog .**

2. **..... are my friends .**

3. **..... is an amazing singer .**

Q12. Dictation :

5

Q13. Oral exam :

5

1- नीचे दिए गए शब्दों के अर्थ लिखो :-

2

i)- सबद.....

ii)- विजय

iii)- घोंसला

iv) सत्यप्रिय)-

2- वाक्य बनाओ :-

2

i) ध्यान.....

.....

ii) समय

.....

3- पर्यायवाची शब्द हर एक के दो-दो पर्यायवाची शब्द लिखिए :- 2

उपहार

आसमान

4- विलोम शब्द लिखिए :- 1

रात

गरमी

5- किसने किससे कहा ? 1

1- प्यास के मारे बुरा हाल हो रहा है ।

.....

6- खाली स्थान भरें :- 2

1-पके घड़े पर कहींचढ़ सकती है ।

2-राम नेरावण का किया ।

7-सही कथन पर सही () तथा गलत कथन पर गलत (x) का निशान

लगाइए :-1

1-सुलेख शिक्षा का एक ज़रूरी अंग है ।()

8-उत्तरदो:-4

1-गुरुपर्व किस रूप में मनाया जाता है ?

.....

.....

.....

.....

2-पशु-पक्षी कहाँ दुबके पड़े थे ?

.....

.....

.....

व्याकरण

25

1-भाषा किसे कहते हैं ?भाषा के कितने रूप हैं ?

3

.....

.....

.....

.....
2 - नीचे लिखे वाक्य पढ़ें और विशेषता बताने वाले शब्द पर गोला लगाए :-2

1-सफेद बिल्ली कहाँ है ?

2-पत्ते का रंग हरा है ।

3 - विशेषण शब्द से खाली स्थान भरिए :-2

1-आपकी कक्षा में बच्चे है ।

2-रोटी है ।

4-उचित क्रिया द्वारा खालीस्थान भरो :- 2

i पर्ल बाज़ार

ii-पापा अखबार.....

5- चारक्रिया शब्द लिखो :-2

.....

6-हरएक वस्तु के दो -दो नाम लिखे :- 4

पानी

माँ

सुबह.....

CI-2

संसार

7-मेरा प्रिय मित्र ' पर दस वाक्य लिखिए :-

Q1. Multiply the following :**6**

1. 23×5

2. 57×7

3. 29×8

4. 38×9

5. 30×6

6. 77×4

Q2. Divide the following :**6**

1. $30 \div 6$

2. $12 \div 4$

3. $28 \div 7$

4. $32 \div 8$

5. $27 \div 3$

6. $36 \div 9$

Q3. Solve the following story sums :**9****1. Rina had 379. She bought a pair of shoes for 219 .How much money was left with her ?****2. Suhel had 789 with him .He spent 567 on clothing and food . What amount is left with him ?**

3. On her birthday Sheena spent 167 on candies , 340 on cake and 387 On balloons and games . How much money was spent by her ?

Q4. Make clock and show the time :

8

1. Quarter to 7

2. Quarter past 4


2. Half past 9

4. Half past 2

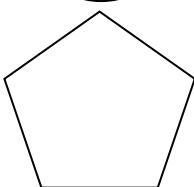
Q5. Divide the following fraction and shade it :

3

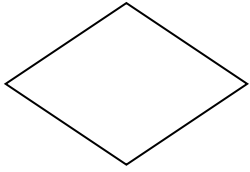
1. $\frac{2}{5}$



2. $\frac{3}{5}$



3. $\frac{1}{4}$



Q6. Write the statements and solve the story sums:

8

1. Seema has 8 baskets .She puts 8 eggs in each basket .How many eggs does she have in all ?

2. Susan has 3 chocolates .If each chocolate has 10 pieces. How many chocolates are there in all ?

MENTAL MATHS

10

1. $24 \div 6 =$

2. $45 \div 5 =$

3. $36 \div 9 =$

4. $18 \div 3 =$

5. $54 \div 6 =$

6. How many minutes are there in 2 hours ?

7. $10 \times 6 =$

8. $8 \times 9 =$

9. $6 \times 7 =$

10. $7 \times 4 =$

Q3. Tick the correct answer. (5)

1. Which is a domestic animal?

- A. lion b. cow c. deer

2. What is wax used to make??

- a. candles b. gum c. rubber

3. The leaves of which plant are used to cure cough and cold?

- a. rose b. potato c. Tulsi

4. People worship Goddess Laxmi on _____.

- a. Holi b. Dussehra c. Diwali

5. Which season is very cold?

- a. summer b. winter c. monsoon

Q4. Animals need our care. Write any three ways in which we can care for animals. (3)

Ans. _____

Q5. Write TRUE or FALSE for each of the following statements. (6)

1. A dog guards our home. _____
2. Some people eat the meat of lions. _____
3. The juice of babool tree is used to make gum. _____
4. Quinine is used to treat malaria. _____
5. The birthdays of Sikh Gurus are called Gurpurabs. _____
6. Pongal is the festival of Uttar Pradesh. _____
7. Snake boat races are held on Onam. _____
8. A grand parade is held in New Delhi on Independence Day. _____
9. Walnut and almonds are dried fruits. _____
10. Potato and tomato are pulses. _____

11. In winters hilly areas are very hot. _____

12. There are nine colours in a rainbow. _____

Q6. Give one word for the following.

(3)

1. The festival of colours. _____

2. The name of the tree which is used to make rubber. _____

3. Name of a flower which is used to make perfume. _____

Q7. Name the festival on which:

(4)

a. People sing carols. _____

a. Langar is organised. _____

b. Sewaiyan is prepared. _____

c. Children burn crackers. _____

Q8. Label and colour the following diagram.

(5)

Q1. Write the definitions of the following ? (any 2)

4

1. coding.....

.....

2. decoding.....

.....

Q2. Fill in the blanks :

6

1. are the regular arrangements of time , shapes and colors.

2. is an online AI based colouring program.

3. akes things easier to understand.

4. Artificial Intelligence is a machine’s ability to..... human intelligence.

5. patterns does not add anything to itself.

6. You Tube suggests similar kind of

Q3. Answer the following questions :

8

1. What is petalica paint ?

.....
.....

2. What is the goal of artificial intelligence ?

.....
.....
.....

3. Give two examples of AI in our daily life?

.....
.....
.....

Q4. Write four uses of AI.

4

.....
.....
.....
.....

Q5. Write answers in one word :

5

1. The ability to deal with changing situations is called.....

2. A normal electronic machine is fed with

3. A smart music system with AI plays music on human voice

4. This represents information using symbols.....

5. A regular arrangement of shapes.....

Q6. Create a landscape using patterns or portrait .

5

GENERAL KNOWLEDGE

25

Q1. What are the things we use in Summer seasons:

3

1.
2.
3.

Q2. Write names of any four seasons:

4

- 1.....
- 2.....
- 3.....
- 4.....

Q3. Write names of any 5 types of homes:

5

1.
2.
3.
4.
5.

Q4. Write the names of any four Natural disaster:

2

1.
2.
3.
4.

Q5. Write any four work that can be done by our smart phones:

4

-
-
-
-

Q6. Write which colour of Red light tells us what :

3

1. Green.....
2. Red.....
3. Yellow

Q7. Write names of any two gadgets.....

2

Q8. Draw and colour any two social media icons :

2

QUES.4 Match the following columns.

(5marks)

COLUMN -A

1. Gardeners
2. This time a wolf
3. Father of Nation
4. Take pity on me
5. Sweepers

COLUMN- B

- a. actually came there
- b. Mahatma Gandhi
- c. Mouse
- d. look after the plants
- e. clean the streets