

# **ST. MICHAEL'S SR.SEC.SCHOOL**

**3, Pusa Road, New Delhi – 110005**

**MODEL EXAM PAPER- TERM 2- 2023- 24 CLASS 5**

**SUB – ENGLISH**

NAME \_\_\_\_\_ ROLL. NO. \_\_\_\_\_ DATE \_\_\_\_\_

**TIME- 2.5 hrs**

**MM-50**

**This question paper consists of two sections. Section A is Literature and Section B is Grammar. Both the sections are compulsory.**

## **SECTION A- LITERATURE**

**Q1. Answer the following questions. Do any 3. (6)**

- 1. Who came to Krishnadevaraya's court? What did he show? What was their reaction?**
- 2. What kind of bet did the king give to Tenali Raman?**
- 3. How did Tenali prove to the king that he had made a beautiful picture?**
- 4. What are nerves?**
- 5. How did Aruna's mother explain to her daughter that a human brain is clever?**

**Q2. Make suitable sentences with the following words. Do any 4. (4)**

- 1. displeased**
- 2. scratch**
- 3. wonderful**
- 4. dream**
- 5. talent**

**Q3. Write T for true and F for false for each of the following statements. (2)**

- a. The computer can receive and send information. \_\_\_\_\_**
- b. When you are bitten by a mosquito on the neck, a message is sent from the neck to the arm. \_\_\_\_\_**
- c. Raja Krishnadeva Raya gave the artist a bag of gold because he wanted to get rid of the artist. \_\_\_\_\_**
- d. The courtiers were happy because they wanted Tenali to fail. \_\_\_\_\_**

**Q4. Give the meanings of the following words. Do any 3. (3)**

- 1. conscious**
- 2. imagine**
- 3. giggling**

4. penalty
5. whisper

### SECTION B- GRAMMAR

**Q5. Fill in the blanks with suitable prepositions (2)**

1. Jane is coming back \_\_\_\_\_ school.
2. The water is flowing \_\_\_\_\_ the bridge.
3. Keep working hard \_\_\_\_\_ you succeed.
4. Keep this secret \_\_\_\_\_ the two of us.

**Q6. Underline the verb in the following sentences and mention their kind. (3)**

- a. Mohit killed the puppy.
- b. The boy looks happy.
- c. Birds fly.

**Q7. Fill in the blanks with suitable conjunctions. (2)**

1. This gown is pretty \_\_\_\_\_ that gown is prettier.
2. I was sleepy, \_\_\_\_\_ I went to bed early.
3. I love my pet more \_\_\_\_\_ my siblings do.
4. We can go by auto \_\_\_\_\_ we can walk.

**Q8. Join the following pairs of sentences using suitable conjunctions. (2)**

- a. I had a lot of homework to do. I did not take my dog out for a walk.
- b. He is a rich man. He is not a generous man.

**Q9. Underline the adverb in the following sentences and mention their kind. (2)**

1. Rajat plucked the flower gently.
2. The workers are taking the garbage away.

**Q10. Fill in the blanks with the simple present tense of the verb given in brackets. (2)**

- a. The man \_\_\_\_\_ to office by metro. (go)
- b. Rabbits \_\_\_\_\_ carrots. (eat)

**Q11. Fill in the blanks with the simple past tense of the verb given in brackets. (2)**

1. I \_\_\_\_\_ to my grandparents home last year. (go)
2. My mother \_\_\_\_\_ a new saree last month. (buy)

**Q12. Fill in the blanks with the past continuous tense of the verb given in brackets. (1)**

1. The girls \_\_\_\_\_ the wall yesterday. (paint)
2. The baby \_\_\_\_\_ in its cradle. (sleep)

**Q13. Change the following sentences from present continuous to future continuous tense. (2)**

1. The gardener is watering the plants.

2. My parents are watching television in the room.

Q14. Fill in the blanks with the simple future tense of the verb given in brackets. (2)

1. We \_\_\_\_\_ our summer holidays in June. (has)
2. The mechanic \_\_\_\_\_ the washing machine next week. (repair)

Q15. Fill in the blanks by choosing the correct verb from the bracket. (2)

- a. Raju \_\_\_\_\_ dinner for the Gupta family. (cook, cooks)
- b. The boys \_\_\_\_\_ to school every day. (walk, walks)
- c. The game \_\_\_\_\_ exciting. (was, were)
- d. The football players \_\_\_\_\_ five kilometres every day. (run, runs)

Q16. Look at the following picture carefully and write a short paragraph on it. (3)



Q16. DICTATION (5)

Q17. ORAL (5)

# ST. MICHAEL'S SR. SEC. SCHOOL

3, PUSA ROAD, NEWDELHI – 110005

MODEL EXAM PAPER-TERM 2 – 2023-24 CLASS V

SUB- HINDI

(भाग क)

अंक: 50

I. निम्नलिखित अपठित गद्यांश को ध्यान से पढ़ें और प्रश्नों का उत्तर दें: 5  
एक बार एक किसान का बैल गहरे गड्ढे में गिर गया। वह जोर-जोर से चिल्लाने लगा। किसान उसे निकालने के उपाय सोचने लगा। अंत में उसने फैसला किया कि बैल बहुत बूढ़ा है, इसलिए उसे गड्ढे में ही दफना दिया जाना चाहिए। किसान ने अपने सभी पड़ोसियों को मदद के लिए बुलाया। दोनों ने मिलकर गड्ढे में मिट्टी डालना शुरू कर दिया। जैसे ही बैल ने सब कुछ समझा, वह जोर-जोर से चिल्लाने लगा और फिर अचानक चुप हो गया। सब चुपचाप गड्ढे में मिट्टी डालने जा रहे थे। फिर किसान ने नीचे देखा तो हैरान रह गया। बूढ़ा बैल अपनी पीठ पर गिरी मिट्टी को हिलाकर नीचे गिरा देता था और उस मिट्टी पर चढ़ जाता था। शीघ्र ही वह गड्ढे के किनारे पर पहुंच गया और फिर अपने साहस और सूझबूझ के बल पर बाहर निकल सका।

अपठित गद्यांश के आधार पर निम्न प्रश्नों के उत्तर दीजिये:

- (क) किसान का बैल कहा गिर गया।
- (ख) बैल का चिल्लाना सुन कर किसान से क्या निर्णय लिया?
- (ग) किसान के पड़ोसियों ने उसकी मदद किस प्रकार की?
- (घ) किसान चकित क्यों रह गया?
- (ङ) गद्यांश का उचित शीर्षक लिखिए

II. प्रधानाचार्य जी को अवकाश के लिए प्रार्थना पत्र लिखिए:

3

III. दिए गए चित्रों के लिए दो- दो पर्यायवाची शब्द लिखिए: 3



IV. अनेक शब्दों के लिए एक शब्द लिखिए: 2

1. पृथ्वी पर रहने वाला:
2. बोलने वाला:
3. मांस खाने वाला :
4. जिसके दिल में दया हो:

5. निम्नलिखित शब्दों के विलोम शब्द लिखिए : 2

स्वामी	जीवन	उत्तीर्ण	आयत
सज्जन	सुर	आदान	जड़

VI. कोष्ठक में दिए गए शब्दों की भाववाचक संज्ञा बनाकर रिक्त स्थानों में भरिए:

2

1. उसका \_\_\_\_\_ बड़ा ही सुख में बीता। (बच्चा)
2. हमें \_\_\_\_\_ से जीवन जीना चाहिए। (कुशल)
3. उसमें \_\_\_\_\_ की भावना है। (अंह)
4. उसकी \_\_\_\_\_ बहुत सुंदर है। (लिखना)

VII. रेखांकित शब्दों के संज्ञा भेद बताइए: 2

1. खिड़की के शीशे टूटे हैं।
2. एवरेस्ट की चढ़ाई बहुत कठिन है।
3. मदर टेरेसा समाज सेविका थी।

VIII. कोष्ठक में दिए गए निर्देश अनुसार सर्वनाम शब्द लिखिए: 2

1. बाहर \_\_\_\_\_ दरवाजा खटखटा रहा है। (निश्चयवाचक सर्वनाम)
2. तुम \_\_\_\_\_ कर रहे हो? (प्रश्नवाचक सर्वनाम)
3. तुम \_\_\_\_\_ चले जाओ।(निजवाचक सर्वनाम)
4. \_\_\_\_\_ गुलाब का फूल है।(निश्चयवाचक सर्वनाम)

IX. निम्नलिखित वाक्यों में विशेषण और विशेष्य को अलग- अलग लिखिए: 2

1. रोहित, खट्टे अंगूर मत खाओ।
2. मां ने आज गुलाबी साड़ी पहनी है।

X. निम्नलिखित वाक्यों में विशेषण शब्द रेखांकित कर उनके भेद लिखिए: 2

1. दो किलो चावल ले आओ।
2. काले बादल छा गए।
3. वह लड़का बुद्धिमान है।
4. मेरी कक्षा में पचास बच्चे पढ़ते हैं।

(भाग ख)

XI. निम्नलिखित शब्दों के अर्थ लिखिए:

3

1. संग्रहीत
2. रिसाइकल
3. उद्योग
4. प्रक्रिया
5. शल्य
6. अस्त व्यस्त

XII. खाली स्थान भरिए:

2

1. आचार्य सुश्रुत को वेदों और \_\_\_\_\_ का भी अच्छा ज्ञान था।
2. संचिता और रोमित \_\_\_\_\_ पेपर से मधुमक्खियां बनाने लगे।
3. सुश्रुत नेत्र \_\_\_\_\_ भी करते थे।
4. जल \_\_\_\_\_ का आधार है।

XIII. गलत वाक्य के सही उत्तर लिखिए:

4

1. सुश्रुत कुशल चिकित्सक बनने के लिए व्यावहारिक प्रयोग को जरूरी नहीं समझते थे।
2. ध्वनि प्रदूषण से हैजा पीलिया जैसी बीमारियां होती हैं।
3. पेड़ काटते रहने से मानव जाति का विकास संभव है।
4. धन्वंतरी काशी के मंत्री थे।

XIV. निम्नलिखित प्रश्नों के उत्तर लिखिए:

(2X3=6)

1. सुश्रुत श्रेष्ठ शल्य चिकित्सा होने के साथ-साथ श्रेष्ठ शिक्षक भी थे। कैसे?
2. लकड़ी से कागज बनाने का तरीका क्या है?
3. प्लास्टिक किस प्रकार हमारी धरती के लिए हानिकारक है?

XV: DICTATION

5

XVI: ORAL

5

# ST. MICHAEL'S SR SEC SCHOOL

3, Pusa Road, New Delhi – 110005

## SAMPLE PAPER(TERM II) 2023- 24 CLASS V

SUB – MATHS

MM 50

.....  
NAME \_\_\_\_\_ ROLL NO. \_\_\_\_\_

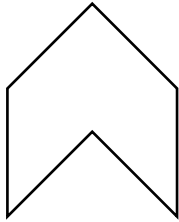
Q1 MENTAL MATHS

(10)

- 1) Which is greater – 24 months or 650 days
- 2) Area of square table of side 10m is \_\_\_\_\_
- 3) What time will it be 2 hrs 35 min after 6:05 p.m. ?
- 4) Sahil paints for 350 min per week. How many hours in a week does he paint for ?
- 5) Tick on the correct unit: A glass filled with water is about – 20ml    200 L    2 L
- 6)  $485 \text{ cm} = \text{_____ m}$   
 $\text{_____ m } \text{_____ cm}$
- 7)  $9.85 \text{ km} = \text{_____ km } \text{_____ m}$
- 8)  $16 \times 9 = \text{_____}$
- 9)  $15 \times 8 = \text{_____}$
- 10)  $14 \times 7 = \text{_____}$
- 11)  $18 \times 9 = \text{_____}$
- 12)  $19 \times 6 = \text{_____}$

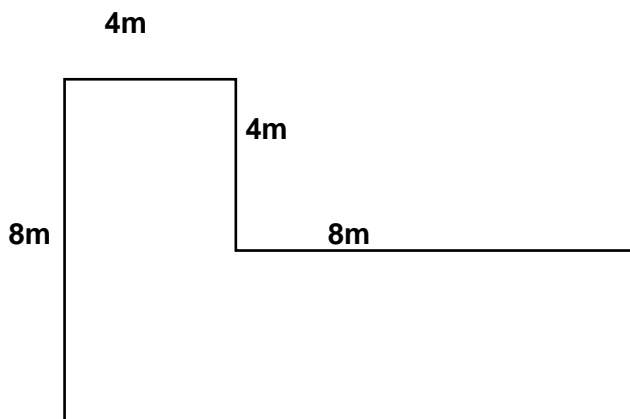


**Q2 Draw the line of symmetry: (1)**



**Q3 Convert 25°C INTO °F. (1)**

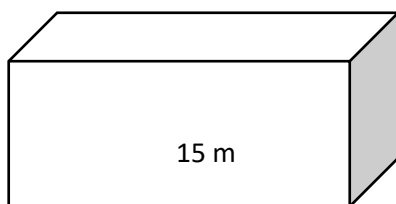
**Q4 Find the area of the given figure: (3)**



**Q5 Find the volume of the given cuboid whose length is 15m , breadth is 12 m and height**

**is 8 m ?**

**(2)**



**Q6 Solve as per instructions: (3)**

**Divide 218m 15 cm by 15**

**Multiply 15 kg 42g by 12**

**Q7 Solve : (3)**

**6 hrs 15 min 20 sec + 8 hrs 52 min 40 sec**

**5 years 8 months – 10 years 6 months**

**Q8 ALGEBRA : (4)**

1)  $8x + 8y + 8x - 4x - 10y + 4y$

2) Find the value of  $6y - 3$  if  $y = 4$

3) Write the expression for 20 subtracted from twice of z.

4) 12 times x divided by 7

**Q9 Convert the following : ( Do any 4) (4)**

1)  $3757 \text{ m} = \text{_____ km}$

2)  $9\frac{3}{4} \text{ kg} = \text{_____ g}$

3)  $15 \text{ kg } 350 \text{ g} = \text{_____ kg}$

4)  $853.7 \text{ litre} = \text{_____ litre _____ millilitre}$

5) 4 years 120 days = \_\_\_\_\_ days

6) 620 sec into min and seconds

**Q10 Construct a bar graph for the marks obtained by Naman in 5 subjects.**

**Eng = 70 Hindi- 75 Maths -60 EVS -80 computer – 95  
(2.5)**

**Q 11 Area of a rectangular field is 1000 sq. m. Find its length if breadth is 20m.**

**(1.5)**

**Q12 Bricks of 18cm x 12 cm x 15 cm are to be placed in a store room of  
180cm x 300 cm x 240cm. Find the number of bricks that can be placed in a  
store room.**

**(2.5)**

**Q13 SOLVE PROBLEM SUMS : (2.5 x 5 = 12.5)**

- a) Manas bought 11 curtain rods to hang curtains. If each rod is 3.46 m, find the total length of the rod?
- b) Rita weighs 53kg 250g while Sita weighs 53.5 kg. Who weighs more and by how much?
- c) 250g of coffee has to be packed in a jar. How many jars will be needed for 4 kg coffee?
- d) Pooja wants to put a square tiles on a wall? The length of wall is 7m and breadth is 5 m. The side of the square tile is 10 m. How many tiles will be needed ?

e) Pooja purchased a piece of cloth to make curtains which is 5m long and 3 m wide. She was charged at Rs 12 per sq. m. How much did she pay for the cloth?

# **ST. MICHAEL'S SR SEC SCHOOL**

**3, Pusa Road, New Delhi – 110005**

**MODEL TEST EXAM-TERM-2 2023- 24- CLASS- 5**

**SUB – E.V.S.**

**MM 50**

NAME \_\_\_\_\_ ROLL. NO. \_\_\_\_\_ DATE \_\_\_\_\_

**\*Answer all the questions ,do paper neatly.**

**1- Define the following terms (do any FIVE):-10-**

**Earthquake, cyclone ,photosynthesis ,saprophytes ,herbivorous ,scavengers**

**2-Explain the one of the monuments in Eastern India?5**

**3 Match column A with column B (4 )**

- |                     |                       |
|---------------------|-----------------------|
| a- Sun Temple       | kolkata               |
| b- Buland Darwaza   | Konark                |
| c- Victoria Memoria | Fatehpur Sikri (Agra) |
| d- Charminar        | Hyderabad             |

**4-Fill in the blanks:-4**

- A -The Taj Mahal is made of .....**
- b-The British shifted their capital from Calcutta to Delhi in the year.....**
- c-A green can be called a 'food factory' because it .....**
- e- Whooping cough can be prevented by .....**

**5- Write true or false ,if statement is false ,write true one for for it 4**

- 1- Telephone is the fast means of communication.....**
- 2- Radio was invented by Graham Bell.....**

**6-Answer in brief:-8**

**1- Explain the process of photosynthesis?**

**2- What is disease?**

**3- What are deficiency diseases?**

**4- Write a short note on Red fort?**

**7-Answer in detail:-5**

**1 What are plants and animals called producers and consumers respectively?**

**2 Name some popular means of mass communication?**

**8-Draw and colour Earthquake and photosynthesis diagram ? 10**

# **ST. MICHAEL'S SR SEC SCHOOL**

**3, Pusa Road, New Delhi – 110005**

**SAMPLE PAPER(TERM II) 2023- 24 CLASS V**

**SUB – COMPUTER**

MM 30

.....

NAME \_\_\_\_\_ ROLL NO. \_\_\_\_\_

Q1 Define the following: (any 6) (1.5 x 6= 9)

)

1) Graphics -

---

---

2) Animation -

---

---

3) Presentation -

---

---

4) Slide -

---

---

5) Artificial intelligence -

---

---

6) Deep learning -

---

---

7) Machine learning -

---

---

**Q2 Give two examples of presentation softwares? (2)**

---

**Q3 Write the steps to create a presentation using installed themes? (4)**

---

---

---

---

---

**Q4 Name the three basic views of Power point Presentation? (2)**

---

---

**Q5 Name any four types of slide layouts ? (2)**

---

**Q6 Explain any two AI technologies that we use in day to day life ? (4)**

---

---

---

---

**Q7 How AI can support Automobile industry? (2)**

---

---

**Q8 How AI is useful in agriculture industry? (2)**

---

---

**Q9 Fill in the blanks : (3)**

- 1) \_\_\_\_\_ is a field of artificial intelligence that handles image and video analysis.
- 2) AI uses \_\_\_\_\_ to interpret voice commands and converts them into text command.
- 3) The method of arranging things and objects on a slide is a \_\_\_\_\_.



# **ST. MICHAEL'S SR. SEC. SCHOOL**

**3, Pusa Road, New Delhi – 110005**

**MODEL EXAM PAPER – TERM-2 2023- 24 CLASV**

SUB – MORAL SCIENCE

M.M.: 25

Name: \_\_\_\_\_ Roll. No: \_\_\_\_\_ Date: \_\_\_\_\_  
\_\_\_\_\_

**Answer the following questions:** **10**

**Q.1 Why didn't Pt. Vishnu Sharma accept the hundred land grants from the king?**

.....  
.....  
.....

**Q.2 Who was Mr. Giles?**

.....  
.....  
.....

**Q.3 Why was Abraham Lincoln called 'Honest Abe'?**

.....  
.....  
.....

**Q.4 How did Ishwar Chandra Vidyasagar turn the Nawab's shoe into a valuable donation?**

.....  
.....  
.....

**Q.5 What made the pundit become more humble?**

.....  
.....  
.....

**Fill in the blanks**

**5**

- 1. A king called \_\_\_\_\_ ruled a kingdom, whose capital was a city called Mahilaropya.**
- 2. The name of Gandhiji's autobiography is \_\_\_\_\_**
- 3. The name of the high school where Gandhi studied \_\_\_\_\_**
- 4. Abraham Lincoln became the president of the United States in \_\_\_\_\_.**
- 5. Abraham Lincoln was the \_\_\_\_\_ president of the United States.**

**Write the word meaning of the following words.**

**5**

1. despaired - \_\_\_\_\_
2. conflicting - \_\_\_\_\_
3. dissemination - \_\_\_\_\_
4. haunted - \_\_\_\_\_
5. avid - \_\_\_\_\_

**Match the following**

2.5

- |                              |                  |
|------------------------------|------------------|
| 1. My experiments With Truth | Anne Frank       |
| 2. The Diary of a Young Girl | Malala Yousafzai |
| 3. Dreams from my Father     | Helen Keller     |
| 4. I am Malala               | Mahatma Gandhi   |
| 5. The Story of My Life      | Barack Obama     |

**Write True or False for the following**

2.5

1. Abraham Lincoln was born in Kentucky.  
\_\_\_\_\_
2. Ishwar Chandra Vidyasagar carried the luggage of pundit. \_\_\_\_\_
3. Panchatantra means the five stories. \_\_\_\_\_
4. Mahatma Gandhi believed in the concept of truthfulness. \_\_\_\_\_
5. Pt. Vishnu Sharma accepted the promised reward. \_\_\_\_\_

# **ST. MICHAEL'S SR SEC SCHOOL**

**3, Pusa Road, New Delhi – 110005**

**SAMPLE PAPER(TERM II) 2023- 24 CLASS V**

**SUB – GENERAL KNOWLEDGE**

MM 25

.....  
NAME \_\_\_\_\_ ROLL NO. \_\_\_\_\_

Q1 ANSWER THE FOLLOWING:

1) A person who fight for the country.

\_\_\_\_\_

2) A person who writes computer programs.

\_\_\_\_\_

3) National bird of Turkey is

\_\_\_\_\_

4) Mute swan is the national bird of which country.

\_\_\_\_\_

5) Full form of UNICEF is

---

6) Organisation that works for the prevention and cure of diseases.

---

7) How many nations prepared The charter of UN.

---

8) The ozone layer protects us from too much of

---

9) White liquid from which rubber is made from?

---

10) Poisonous substance found in tobacco is

---

11) How many countries are the part of SAARC nations?

---

12) Five point someone is written by

---

13) A suitable boy is written by

---

14) Nick name of Vivekananda is

---

15) Rabindra Nath Tagore is called as

---

**16) The white fur of this animal helps it merge with the snow of icy arctic and escape the enemy.**

---

**17) They have thick skin formed by bony plates.**

---

**18) Which planet is identified with maximum moons and how many.**

---

**19) What is Saturn made up of ?**

---

---

---

**20) Swaraj is my birth right is the slogan given by**

---

**21) This freedom fighter sacrificed his life at the age of 23.**

---

**22) Name the son of Arjuna and Draupadi.**

---

**23) Guru of Asur**

---

**24) Full Form of FAO is**

---

**25) What is the work of UNESCO?**

---

---

---

---