

ST. MICHAEL'S SR SEC SCHOOL

3, Pusa Road, New Delhi – 110005

MODEL EXAM PAPER 2025-26 CLASS –I

SUB – ENGLISH

M.M: 40

Name : _____ **Roll. No. :** _____ **Date :** _____

Literature

Q.1 Fill in the blanks **4**

- a. Samir was Juhi's _____.
- b. Juhi had come back from _____.
- c. The rabbit took the lion to a _____.
- d. The lion _____ into the well.

Q.2 Answer these questions. **4**

a. Where was Juhi back from ?

b. Who was Samir ?

c. Who was the king of the forest ?

d. Who went to the lion ?

Q.3 Write True or False.

3

- a. Juhi picked up an orange . _____
- b. An old lion was the king of the forest. _____
- c. Juhi was Samir's sister. _____

Q.4 Make sentences from the words given.

4

- a. School - _____
- b. hungry - _____
- c. brother - _____
- d. rabbit - _____

Grammar

Q1. Change the gender of the following words.

3

- a. boy - _____
- b. brother - _____
- c. uncle - _____
- d. sir - _____
- e. father - _____
- f. man - _____

Q.2 Fill in the blanks with describing words.

3

- a. _____ car
- b. _____ cake
- c. _____ girl
- d. _____ flower
- e. _____ sky
- f. _____ pencil

Q.3 Circle the describing word in these sentences.

4

- a. Ria is a happy girl.
- b. I have a new car.
- c. I have three pens.
- d. It is a cold day.

Q.4 Fill in the blanks with has or have.

3

- a. I _____ a pet dog.
- b. My father _____ a new book.
- c. They _____ many toys.
- d. This book _____ a nice cover.
- e. My mom and dad _____ a new house.
- f. The house _____ three windows.



gg63537785 GeGraph.com

The girl is _____ the table.




many this photo

The books are _____ the table.



The vegetables are _____ the basket.



The bird is _____ the tree.



The flower pot is _____ the table.

Q.6 Rewrite these sentences using pronouns.

a. My grandfather is reading a book.

b. The children are playing.

c. The cake is tasty.

d. Boys are playing.

Q.7 Write 5 lines on the topic Christmas.

5

ST. MICHAEL'S SR SEC SCHOOL

3, Pusa Road, New Delhi – 110005

MODEL EXAM PAPER-**TERM-2** 2025- 26- CLASS- 1

SUB – HINDI

MM 50

NAME _____ ROLL. NO. _____ DATE _____

1- हर एक मात्रा के दो- दो उदाहरण लिखो :- 10

अ
आ
इ
ई
उ
ऊ
ए
ऐ
ओ
औ

2-वर्णों के साथ मात्राएँ लगाकर फ़लों के नाम पूरे कीजिए :- 2

तरबज , खरबजा , पप ता , ल च

4-मात्राएँ ठीक करके सब्जियों के नाम दोबारा लिखिए :- 2

आलु
गौभी
लोकी
बेंगन

cl-1

5- 'मेरी पाठशाला' पर पाँच वाक्य लिखो :-

5

.....

.....

.....

.....

.....

.....

.....

.....

6- किसकी बोली है नाम लिखिए :-

2

i- मुरगा

ii- कबूतर

iii- तोता

iv- चिड़िया

7- भाषा के कितने प्रकार हैं ?

1

.....

8- काम बताने वाले दो शब्द लिखिए :-

2

-----, -----

9- विशेषता बताने वाले दो शब्द बताइए :-

2

-----, -----

10- खाली स्थान भरो :-

2

1 - सबनेदेखा ।

2 - सब बड़े..... थे ।

11- वाक्य बनाओ :-

2

सब

घर

12 -उत्तर दीजिए :-

4

1-झील में कौन तैरा ?

.....

2-बादलों को गरजते देख कौन नाचा ?

.....

13-7-सही कथन पर सही () तथा गलत कथन पर गलत (x) का निशान

लगाइए :-

2

1- किसी ने दरवाज़ा खटखटाया । ()

14- चित्र बना कर रंग भरो :-

4

मटका

टोकरी

--	--

15-empla and oral exam will also be taken

XX

ST. MICHAEL'S SR SEC SCHOOL

3, Pusa Road, New Delhi – 110005

MODEL EXAM PAPER-TERM 2- 2025- 26 CLASS 3

TIME- 2.5 hrs

SUB – MATHS

MM (50)

.....
.....

NAME _____

ROLL. NO. _____

DATE _____

1. Write the number names:

2

a) 78 _____

b) 14 _____

c) 99 _____

d) 11 _____

2. Write the numbers in figures:

2

a) twenty-five _____

b) Ninety-six _____

c) Eighty – five _____

d) Twelve _____

3. Write the number before:

2

a) _____ 145

b) _____ 190

c) _____ 133 d) _____ 110

4. Write the number after:

2

a) 89 _____

b) 150 _____

c) 119 _____

d) 199 _____

5. Write the number between:

2

a) 156 _____ 158 b) 121 _____ 123 c) 179 _____ 181

d) 100 _____ 102

6. Arrange Small to Big :

2

a) 145, 123, 167, 132 : _____

b) 102, 98, 110, 87 : _____

7. Arrange Big to small :

2

a) 190, 160, 130, 200 : _____

b) 155, 140, 165, 187 : _____

8. Write the expanded form:

2

a) 134 : _____

b) 126 : _____

c) 154: _____

d) 173 : _____

9. Write the short form:

2

a) $100 + 40 + 6$: _____

b) $100 + 20 + 3$: _____

c) $100 + 90 + 0$: _____

d) $200 + 00 + 0 =$ _____

Q10. COMPARING : (< , > =)

2

104		140
139		139
111		101
143		134

11. Solve:

2

a) $10 + 5 =$ _____

b) $20 - 8 =$ _____

c) $5 + 9 =$ _____

d) $15 - 6 =$ _____

T	O
1	4
+ 8	4

T	O
6	9
- 5	4

T	O
2	5
+ 6	3

T	O
9	7
- 5	2

Q13. Solve on number line :

3

A. $15 + 2 =$

B. $13 - 7 =$

c) $19 - 9 =$

13. Answer the following:

4

a) Which day is today ?

Ans: _____

b) Which day is tomorrow?

Ans: _____

c) Which day was yesterday ?

Ans: _____

d) Write two days of the week with 'S'.

Ans: _____

14. Skip Counting :

3

120		124	
	170		190
55			70

15. Multiply by repeated addition :

2

SUM	ANS	REPEATED ADDITION	ANS
a) 2×3			
b) 5×7			

16. Solve:

2

T O

T O

T O

T O

5

7

1 0

8

X 9

X 2

X 5

X 5

17. Look at the note and answer the questions :

2



What is the value of the note ? _____

Colour of the note _____

How many times digit 5 is written _____

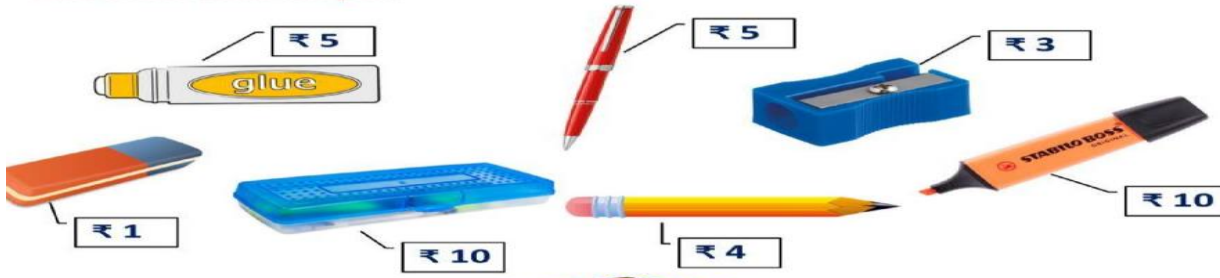
Two notes of 5 = _____

digits written on the right side = _____

















3

Help the students to buy the given stationery items

First one is done for you.



STATIONERY SHOP

			
 <input type="text" value="1"/> +  <input type="text" value="3"/> +  <input type="text" value="4"/> Total: ₹ <input type="text" value="8"/>	 <input type="text"/> +  <input type="text"/> +  <input type="text"/> Total: ₹ <input type="text"/>	 <input type="text"/> +  <input type="text"/> +  <input type="text"/> Total: ₹ <input type="text"/>	 <input type="text"/> +  <input type="text"/> +  <input type="text"/> Total: ₹ <input type="text"/>

18 : Story Sums :

5

a) Neha has 14 balloons. She gets 5 more balloons.

How many balloons does she have in all?

b) There are 20 oranges in a basket. 6 oranges are given away.

How many oranges are left?

c) One cat has two eyes . 8 cats will have how many eyes?

ST. MICHAEL'S SR SEC SCHOOL

3, Pusa Road, New Delhi – 110005

MODEL EXAM PAPER

2025-26

CLASS – I

SUB – EVS

M.M. : 50

Name : _____ **Roll. No:** _____ **Date :** _____

Q1. Fill in the blanks

10

1. We need food to _____.
2. _____ your hands before meals.
3. We see _____ all around us.
4. Creepers grow along the _____.
5. Horses are kept in a _____.
6. Pigs are kept in a _____.
7. We should cross the road at the _____.
8. The second largest road network is of _____.
9. We go from one place to _____.
10. Animals need _____ to stay alive.

Q.2 Write True or False

2

1. Big and tall plants are called shrubs.

2. Rose plant is a climber.

3. Milk is a complete food.

4. Sheep are kept in a pen.

Q.3 Tick (✓) the correct option.

2

1. Which one is a fast food ?

a. pizza

b. pulses

2. Which of the following is a shrub ?

a. rose

b. grass

3. How do most leaves look ?

a. green

b. yellow

4. Which animal eats insects ?

a. hen

b. lizard

Q.4 Choose the correct option.

2

1. Fast food is easy / difficult to cook.

2. Fast food is good / bad for health.

3. Trees have thick / thin stems.

4. Lotus / Rose is the national flower.

Q.4 Give two examples of each -

4

a. Air transport

b. Climbers

c. Things which give us energy

d. Animals which eat plants

Q.5 Answer in short.

4

a) Name the plant which need support to grow.

b) Name the national flower.

c) Name the home of rabbit.

d) Which animal has the longest neck ?

Q.6 Answer the following questions.

6

a) What are shrubs ?

b) Write two table manners.

c) What are the two safety rules at home ?

Q.7 Match the following

2

1	Tree	watermelon
2	Shrub	mango
3	Herb	rose
4	Creeper	grass

Q.8 Write the name of home of these animals

4

a. monkey _____

b. lion _____

c. cow _____

d. rabbit _____


a) Write three road safety rules.

b) Draw a plant and label its part.





Q.10 Look at the picture and write the name of following.

4





Q.11 Draw and name two things which give us energy.

2



Q.12 Draw two means of water transport and name them.



ST. MICHAEL'S SR SEC SCHOOL

3, Pusa Road, New Delhi – 110005

MODEL TEST PAPER TERM -II - 2025- 26 CLASS - KG









SUB – Computer

MM 25

NAME _____ ROLL. NO. _____ DATE _____

Q.1. Look at the pictures and circle the natural things.

5



Q. 2. Fill in the blanks.

5

Fill, Tux Paint, Artificial, Natural things, intelligent


1. _____ is a free drawing and colouring programe.
2. _____ tool is used to fill color in any closed shape.
3. _____ things are not found naturally.
4. We become _____ when we start doing correct things on our own.
5. Artificial things are the copy of _____.

Q.3. Write True and False for the following statements. 5

1. Artificial things are not found naturally. _____
2. We do not need Internet connection to open auto Draw. _____
3. Toolbar contains all the drawing and editing tools. _____
4. Paint tool is used to draw shapes. _____
5. Quit tool is used to close the Tux paint program. _____

Q. 4. Join the dots to complete the picture given below and color it.

10



ST. MICHAEL'S SR.SEC.SCHOOL

3, Pusa Road, New Delhi – 110005

MODEL EXAM PAPER- 2025- 26 -CLASS 1

SUB – GK

MM-25

.....
NAME _____ ROLL. NO. _____ DATE _____

Q1. Write whether the following is a junk food or healthy food. (2)





Q2. Fill in the blanks by choosing the correct word from the box. (4)

HOLI	CHRISTMAS	EID	DIWALI
------	-----------	-----	--------



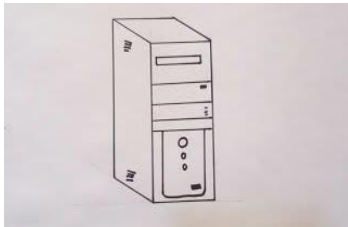







Q3. Name the following.

(4)









Q4. Fill in the blanks by choosing the correct word from the box.

(3)

CRICKET	BASKETBALL	FOOTBALL
---------	------------	----------







Q5. Draw a line to match the following

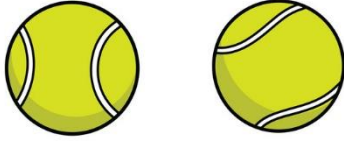
(4)



TENNIS



BASKETBALL



FOOTBALL



CRICKET


Q6. Fill in the blanks by choosing the correct word from the box.

(4)

TOM N JERRY, CHHOTA BHEEM, PEPPA PIG, MICKEY MOUSE










Q7. Name the following shapes.

(3)







Q8. Write the name of your favourite game.

(1)

Ans. _____

1.	2.	3.
----	----	----

Pet Birds

1.	2.	3.
----	----	----

Ques.5 Can you reply?

(4marks)

1. What should you say if someone does something for you?

.....

2. If you are travelling in a bus and someone leaves his seat for you, what should you say?

.....

Ques.6 Tick the animals which can be kept as pets.

(5marks)



()

()

()

()

()