

# **ST. MICHAEL'S SR.SEC.SCHOOL**

**3, Pusa Road, New Delhi – 110005**

**MODEL EXAM PAPER- TERM 2- 2023- 24 CLASS 3**

**SUB – ENGLISH**

.....  
NAME \_\_\_\_\_ ROLL. NO. \_\_\_\_\_ DATE \_\_\_\_\_

**TIME- 2.5 hrs**

**MM-50**

**This question paper consists of two sections. Section A is Literature and Section B is Grammar. Both the sections are compulsory.**

## **SECTION A**

**Q1. Answer the following questions. Do any 3.**

**(6)**

- 1. What did the teacher tell the children?**
- 2. What did the second boy want to become?**
- 3. What did Shabnam Khan want to talk about?**
- 4. Who was Akbar? What happened to him?**
- 5. Why was Akbar bored?**
- 6. How did the hakims try to cheer him up?**

**Answers.**

---

---

---



**Q4. Make suitable sentences with the following words. Do any 4.**

**(4)**

1. emperor
2. realized
3. respect
4. afraid
5. bitter
6. upset

**Sentences**

1. \_\_\_\_\_
2. \_\_\_\_\_
3. \_\_\_\_\_
4. \_\_\_\_\_

**SECTION B**

**Q5. Fill in the blanks with suitable prepositions.**

**(3)**

- a. The plane is flying \_\_\_\_\_ the clouds.
- b. My father parked the car \_\_\_\_\_ the house.
- c. Kapil went to the market \_\_\_\_\_ his mother.
- d. Birds fly \_\_\_\_\_ the sky.
- e. Sohan jumped \_\_\_\_\_ the pond.
- f. The puppy is hiding \_\_\_\_\_ the cupboard.

**Q6. Underline the adverb in the following sentences and mention its kind.**

**(3)**

1. Please speak quietly.

Ans.

---

2. My father came home early.

Ans.

---

3. The baby is sleeping inside.

Ans.

---

**Q7. Fill in the blanks with suitable conjunctions. (2)**

1. Anisha \_\_\_\_\_ Dev are riding their bicycles.
2. Aayush, are you sleeping \_\_\_\_\_ studying?
3. The hotel was good \_\_\_\_\_ costly.
4. He has to take rest \_\_\_\_\_ he is not feeling well.

**Q8. Join the following pairs of sentences by using suitable conjunctions. (3)**

a. Do you want your hair curly? Do you want your hair straight?

Ans.

---

b. I have a bat. I have a ball.

Ans.

---

c. The old man went to the doctor. He was not well.

Ans.

---

**Q9. Give the synonym of the following words. (2)**

- a. centre \_\_\_\_\_
- b. evil \_\_\_\_\_
- c. close \_\_\_\_\_
- d. end \_\_\_\_\_

**Q10. Write the antonym of the following words. (2)**

1. top \_\_\_\_\_
2. win \_\_\_\_\_
3. give \_\_\_\_\_
4. far \_\_\_\_\_

**Q11. Change the following sentences from present continuous to past continuous tense. (2)**

1. The bird is singing a song.

Ans. \_\_\_\_\_

2. The children are playing in the park.

Ans. \_\_\_\_\_

**Q12. Fill in the blanks with the simple present tense of the verb given in brackets. (2)**

1. The boys \_\_\_\_\_ in the auditorium. (dance)
2. My mother sits and \_\_\_\_\_ a book in the balcony. (read)

**Q13. Fill in the blanks with may, may not, can, cannot, should, or, should not, in the following sentences. (3)**

1. We \_\_\_\_\_ speak politely to elders.
2. \_\_\_\_\_ I go to the washroom, Sir?
3. We \_\_\_\_\_ tease anyone.
4. Anil \_\_\_\_\_ speak English but he \_\_\_\_\_ speak French.
5. Tanya you \_\_\_\_\_ get up late in the morning.



# ST. MICHAEL'S SR SEC SCHOOL

3, Pusa Road, New Delhi – 110005

## MODEL EXAM PAPER-TERM-2- 2023- 24- CLASS- 3

SUB – HINDI

MM 40

NAME \_\_\_\_\_ ROLL. NO. \_\_\_\_\_ DATE \_\_\_\_\_

(साहित्य )

1-नीचे दिए गए शब्दों के अर्थ लिखो :-

2

i)- करहाना

.....

ii)- खस्ता

.....

iii)- दाख

.....

iv)- मस्त कलंदर

.....

2- वाक्य बनाओ :-

2

i) उपाय

.....

.....

ii) कारण.....

.....

3- खाली स्थान भरों :-

1

1 थोड़ी देर .....करो।

11.....अभी तो तुम स्कूल से आई हो।

4-नीचे दिए गए वाक्यों को सही करके लिखिए :-

3

i- मुझे एक हिरण दिखाई दी

.....

ii-शेर को दर्द हो रही है

.....

5-उत्तर दो :-

5

i-शतपत्र क्या खाता था? और क्यों ?

.....

.....

.....

.....

ii)- काले रंग के किस फल का नाम कविता में आया है ?

.....

.....

.....

.....

6-किसने किससे ,कहा ?

2

तुम कठफोड़ा होकर भी कीड़े मकोड़े नहीं खाते ?

.....

( व्याकरण )

1 - चार दिन के अवकाश के लिए प्रार्थना पत्र लिखे :-

6

2-

5



1. दिए गए गद्यांशों को ध्यान से पढ़िए और पूछे गए प्रश्नों के उत्तर दीजिए-

'फूल' शब्द बोलते ही तरह-तरह के फूल याद आ जाते हैं। गुलाब, कमल, गेंदा, सूरजमुखी, चंपा, चमेली आदि फूलों को हम अच्छी तरह जानते और पहचानते हैं। फूलों की हजारों जातियाँ हैं। फूल बहुत सुंदर होते हैं। वे हमें खुशबू देते हैं। वे पेड़-पौधों की शोभा बढ़ाते हैं। माली फूलों से माला, गजरा, वेणी, तोरण आदि बनाता है। फूल भगवान पर चढ़ाए जाते हैं। सचमुच, फूल दुनिया को सुंदर बनाते हैं।

क- माली फूलों से क्या बनाता है ?

.....

ख उपयुक्त गद्यांश में आए फूलों के नाम लिखो ?

.....

ग पेड़ पौधों की शोभा किससे बढ़ती है ?

.....

घ -फूल शब्द के दो पर्यायवाची शब्द लिखे ?

.....

.....

ड -इस गद्यांश का उचित शीर्षक बताओ ?

.....

.....

3-क्रिया शब्द ढूँढ कर लिखिए :-

4

i-देखना ,राम,मोटा

.....

ii-रेनू,नाचना ,सुन्दर

.....

4-नीचे दिए गए वर्गों के शब्दों का मिलान कीजिए :-

4



# ST. MICHAEL'S SR. SEC. SCHOOL

3, Pusa Road, New Delhi – 110005

MODEL EXAM PAPER – TERM-2 2023- 24

CLASS III

SUB – MATHS

M.M.: 50

Name: \_\_\_\_\_ Roll. No: \_\_\_\_\_

Date:

\_\_\_\_\_

## Section - A

Q.1 Fill in the blanks.

(5)

1.  $\frac{1}{4} + \frac{1}{4} + \frac{1}{4} + \frac{1}{4} =$  \_\_\_\_\_

2. If the fraction for boys in the class is  $\frac{22}{35}$ , then the number of girls in the class is \_\_\_\_\_

3. A \_\_\_\_\_ is an exact position on a flat surface.

4. My mother's weight is 60 \_\_\_\_\_

5. My school is 6 \_\_\_\_\_ away from my home.

6. 4 parts out of 9 equal parts = \_\_\_\_\_

7.  $13 \times 4 =$  \_\_\_\_\_

7.  $11 \times 5 =$  \_\_\_\_\_

8.  $8 \times 7 =$  \_\_\_\_\_

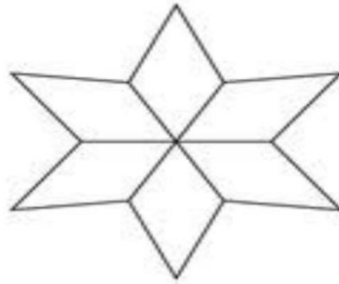
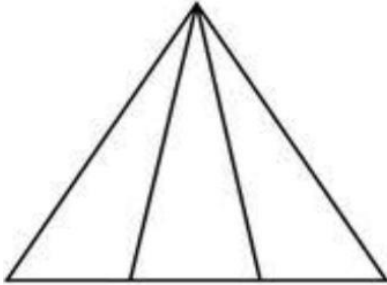
9.  $15 \times 6 =$  \_\_\_\_\_

10.  $18 \times 3 =$  \_\_\_\_\_

## Section -B

Q.2 Colour one- third or  $\frac{1}{3}$  of each shape.

1



Q3. Arrange  $\frac{3}{8}$ ,  $\frac{5}{8}$ ,  $\frac{1}{8}$ , and  $\frac{7}{8}$  in ascending order.

1

Q4 There are 14 trees in a park. Five of the trees are neem trees. What fraction of the trees is the neem tree?

1

Q5 Write the fraction where numerator is 4 and denominator is 7.

1

Q6 Rahi has done two-third of his homework. What fraction is left to be done?

1

Q7 Name the solid shape that match with the following objects.

1



a.

\_\_\_\_\_



b.

\_\_\_\_\_

**Q8 Draw a line segment AB = 6cm.**

**1**

**Q9 Convert the following to rupees.**

**1**

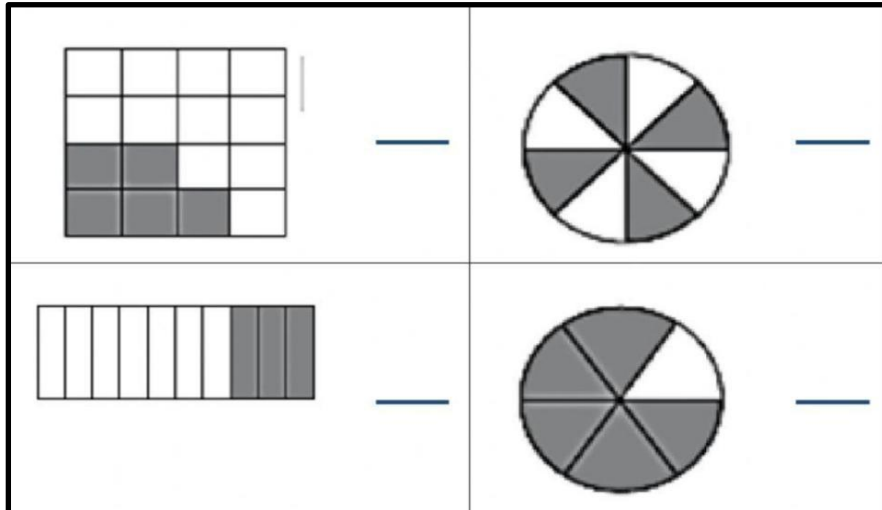
a. 475 p = \_\_\_\_\_

b. 2010 p = \_\_\_\_\_

## Section -C

**Q10 Write the fractions of the shaded portions.**

**2**



**Q11 Identify and name the shape. 2**

- a. I am a 2d shape. I have four sides and four corners. All my sides are equal. \_\_\_\_\_
- b. I am a 3d shape. I have two flat faces and one curved face.  
\_\_\_\_\_

**Q12 Find the fraction. 2**

a)  $\frac{1}{3}$  of 15

b)  $\frac{1}{4}$  of 32

**Q13 Add ₹ 236.75 and ₹ 134.45 2**

**Q14 Multiply**

**2**

**a. ₹23.05 × 5**

**b. ₹65.00 × 7**

## Section -D

**Q15 Solve the following.**

**3**

**Add**

**Subtract**

**Kg g**

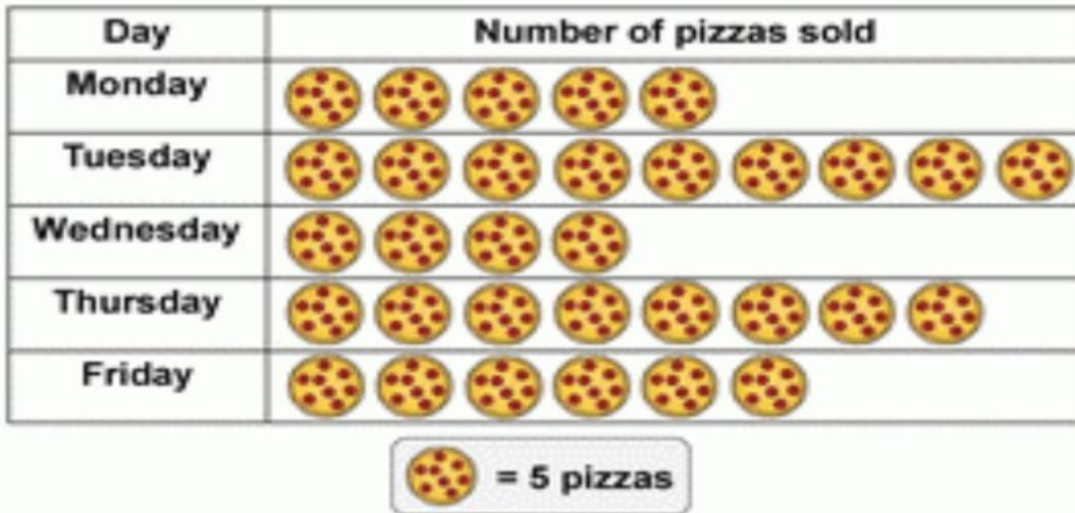
**Kg g**

$$\begin{array}{r} 147\ 995 \\ + 35\ 532 \\ \hline \end{array}$$

$$\begin{array}{r} 386\ 725 \\ - 123\ 654 \\ \hline \end{array}$$

Q16 Jake recorded the number of pizzas sold over five days. Read the pictograph and answer the questions that follows.

3

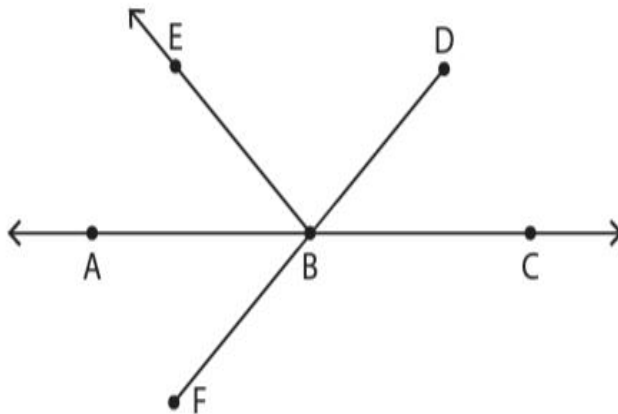


- a. How many pizzas did he sell on Thursday? \_\_\_\_\_
- b. Name the day on which he sold 30 pizzas. \_\_\_\_\_
- c. What is the total number of pizzas sold by him in five days? \_\_\_\_\_

Q17 Look at the picture and answer the following questions.


3





- a. Name all the points
- b. Name any two rays.
- c. Name any two line segments.

**Q 18** In a class, students were asked to name their favourite sports. The data collected is given below. Read the tally chart and answer the questions. 3

Sport	Tally marks
Soccer	
Tennis	
Football	
Baseball	
 Basketball	

- a) How many students have basketball as their favourite sports?
- b) Which sports is the least favourite ?
- c) What is the total number of students in the class ?

**Q.19 Convert the following:**

**3**

- a. 12m to cm**
- b. 7kg to g**
- c. 7000mL to L**

**Q.20 Convert the following:**

**3**

- a. 4m 35cm to cm**
- b. 9kg 455g to g**

**Q.21 Riya buys a box of chocolates for ₹257.50. She gives a 500-rupee note to the shopkeeper. How much money will she get back? 3**

**Q22** Rohit travels 8 km 320m by bus and 4km 665m by car. What was the total distance covered by him? **3**

**Q23** Mina's suitcase weighs 22kg 900g and Raman's suitcase weighs 15 kg 450g. What is the difference in the mass of the two suitcases? **3**

# **ST. MICHAEL'S SR SEC SCHOOL**

**3, Pusa Road, New Delhi – 110005**

## **MODEL EXAM PAPER-TERM 2- 2023- 24 CLASS 3**

**TIME- 2.5 hrs**

**SUB – EVS**

**MM (50)**

.....  
**NAME \_\_\_\_\_ ROLL. NO. \_\_\_\_\_ DATE \_\_\_\_\_**

Q1. Answer the following questions. Do any 8.

(16)

1. How many kinds of festivals are there?
2. How and when do we celebrate Christmas?
3. How do the people of Kerala celebrate Onam?
4. What is weaving? How many kinds of looms are there?
5. What kind of clothes do people wear in towns and cities?
6. Why is noon the hottest part of the day?
7. How does rain affect the weather of a place?
8. What kind of weather do we have in the northern part of our country?
9. Write a few lines on the moon.
10. The stars look very beautiful in the sky. Describe them.

Answers.

---

---

---

---

---

---

---

---

---

---

---

---



---

---

---

---

---

---

---

---

---

---

Q2. Fill in the blanks.

(10)

1. The \_\_\_\_\_ Day of India is celebrated on 15 August every year.
2. The main function on Republic Day is held at \_\_\_\_\_ in New Delhi.
3. During Dussehra, \_\_\_\_\_, the story of Lord Rama is enacted.
4. On the tenth day of Dussehra effigies of \_\_\_\_\_, \_\_\_\_\_ and Kumbhkarna are burnt.
5. \_\_\_\_\_ is called the festival of colours.
6. In West Bengal, Dussehra is celebrated as \_\_\_\_\_.
7. \_\_\_\_\_ is the harvest festival of Tamil Nadu.
8. Cloth is made from \_\_\_\_\_.
9. Blocks are used to print \_\_\_\_\_ on the cloth.
10. The \_\_\_\_\_ is the most common dress for women in India.
11. Both men and women in Kashmir wear long loose coats called \_\_\_\_\_.
12. In Tamil Nadu, the lungi is called \_\_\_\_\_.
13. \_\_\_\_\_ is used as men's headwear in many states like Punjab, Haryana and Rajasthan.

14. The cap of Himachal Pradesh is famous for its \_\_\_\_\_.
15. We wear \_\_\_\_\_ and use \_\_\_\_\_ on a rainy day.
16. Spring is called the \_\_\_\_\_.
17. Lack of rain for a long period of time is called \_\_\_\_\_.
18. \_\_\_\_\_ was the first Indian to go into space. \_\_\_\_\_.

Q3. Which festivals are related with the following. (3)

1. crackers \_\_\_\_\_
2. colours \_\_\_\_\_
3. langar \_\_\_\_\_
4. effigies \_\_\_\_\_
5. Santa Claus \_\_\_\_\_
6. sewain \_\_\_\_\_

Q4. Write True or False for each of the following statements. (6)

1. We celebrate Gandhi Jayanti on 2<sup>nd</sup> October. \_\_\_\_\_
2. On Eid people wear new dresses and go to the mosque or idgah. \_\_\_\_\_
3. Harvest festivals are celebrated when the crop is ready for harvesting. \_\_\_\_\_
4. The famous tiger races are held on Onam, \_\_\_\_\_
5. During Dussehra, Ramlila, the story of Lord Rama is enacted. \_\_\_\_\_
6. Cloudy nights are warmer than clear nights. \_\_\_\_\_
7. Bihu is the harvest festival of Assam. \_\_\_\_\_
8. Socks, sweaters, gloves are made from knitted cloth.
9. Dyeing is the process of adding colour to the cloth. \_\_\_\_\_
10. Sunita Williams became the second woman of Indian origin to go into space. \_\_\_\_\_
11. Amavasya is the day of full moon. \_\_\_\_\_
12. Rain makes the weather hot in winters. \_\_\_\_\_

Q5. Write one word for the following statements. (5)

- a. A group of stars that form a special pattern. \_\_\_\_\_
- b. The first Indian to go to space. \_\_\_\_\_
- c. Birthdays of Sikh gurus. \_\_\_\_\_
- d. The holy month for Muslims. \_\_\_\_\_



- e. The day when Lord Jesus Christ was born. \_\_\_\_\_
- f. The festival of lights. \_\_\_\_\_
- g. A person who goes into space. \_\_\_\_\_
- h. Season when trees shed their leaves. \_\_\_\_\_
- i. The cause of destruction to life and property. \_\_\_\_\_
- j. A famous star. \_\_\_\_\_

Q6. Choose the correct answer. (5)

1. When did India become a republic?

- a. 1947      b. 1950      c. 1960

2. Mundu is the common dress of men and women in \_\_\_\_\_

- a. Assam      b. Odisha      c. Kerala

3. Hot wind that blows in summers is called \_\_\_\_\_.

- a. loo      b. breeze      c. storm

4. The most pleasant season is \_\_\_\_\_.

- a. monsoon      b. spring      c. summer

5. People who study about the stars and moon are called \_\_\_\_\_.

- a. astronomers      b. astronauts      c. dentists

Q7. Make a beautiful drawing of your favourite dress. (2)

Q8. Which is your favourite festival? Make a drawing of it.

(3)





---

---

Q2. Write True or False for each of the following statements.

(4)

1. A word processor is an application software that allows you to type many things such as letters, paragraphs, reports, etc on your computer. \_\_\_\_\_
2. The office button displays the name of the current document and current programme. \_\_\_\_\_
3. The blinking line on the document area is called status bar. \_\_\_\_\_
4. A document area is a large white space to type text. \_\_\_\_\_
5. Using MS Word, you can create, open, edit, save and close documents. \_\_\_\_\_
6. Through e-mail service, we can send and receive text messages, images, videos etc. \_\_\_\_\_
7. The interconnection of a number of computers is called a computer network. \_\_\_\_\_
8. The large collection of information in the form of websites on the internet is known as World Wide Web. \_\_\_\_\_

Q3. Write any 4 advantages of the internet.

(4)

Ans.

---

---

---

---

---

---

---

---

---

---

---

---

Q4. Tick the correct answer.

(4)

1. \_\_\_\_\_ is an application software
  - a. Windows XP
  - b. Windows 7
  - c. MS Word
2. Click office button and then click \_\_\_\_\_ to close MS Word application.
  - a. Open word
  - b. exit word
  - c. Save word
3. Which of the following is not necessary for an internet connection?
  - a. Telephone line
  - b. DVD
  - c. Modem
4. Which of the following is not a web browser?
  - a. Google Chrome
  - b. Mozilla Firefox
  - c. Photoshop

Q5. Fill in the blanks.

(3)

1. If we need to open a website, we have to type the \_\_\_\_\_ of the website in the address bar and press \_\_\_\_\_ key.
2. \_\_\_\_\_ is the short form of World Wide Web.
3. Webpage is stored in an \_\_\_\_\_ on a computer connected to the internet.
4. One can \_\_\_\_\_ songs and movies using internet.
5. Internet connects millions of computers all over the world with one another through \_\_\_\_\_.





4. orphan

---

---

5. instantly

---

---

Q3. Fill in the blanks.

(3)

1. Ekabuddhi had only one \_\_\_\_\_ that he could foresee danger.
2. Aryan Seth was an \_\_\_\_\_ year old boy.
3. Mr Basu gave Aryan a bag of \_\_\_\_\_.
4. Dr Howard Kelly was called to the hospital for the \_\_\_\_\_.
5. The woman received a bill for her \_\_\_\_\_.
6. J. K. Rowling realized that life was full of \_\_\_\_\_.

Q4. Give the meanings of the following words. Do any 4.

(4)

1. determined \_\_\_\_\_
2. owe \_\_\_\_\_
3. instantly \_\_\_\_\_
4. deaf \_\_\_\_\_
5. scar \_\_\_\_\_
6. congratulate \_\_\_\_\_

Q5. Write whether the following statements are true or false.

(5)

1. The fishermen came and cast their nets all over the pond. \_\_\_\_\_
2. Mother Teresa's original name was Shubhi. \_\_\_\_\_



3. Even after removing the nails, there were holes in the fence. \_\_\_\_\_

4. Howard Kelly asked the woman for a glass of juice. \_\_\_\_\_ -

5. J. K. Rowling wrote a series of seven books about 'Harry Potter'.

\_\_\_\_\_

# ST. MICHAEL'S SR.SEC.SCHOOL

3, Pusa Road, New Delhi – 110005

## MODEL EXAM TERM 2- 2023- 24 CLASS 3

SUB – GK

MM-25

.....  
NAME \_\_\_\_\_ ROLL. NO. \_\_\_\_\_ DATE \_\_\_\_\_

**Q1. Fill in the blanks. (8)**

1. \_\_\_\_\_ is a person who makes jewellery.
2. \_\_\_\_\_ has written some famous books like Noddy, Famous Five and Secret Seven.
3. \_\_\_\_\_ is the biggest continent.
4. The continent of \_\_\_\_\_ is entirely covered with ice.
5. Washing clothes in lakes and ponds causes \_\_\_\_\_ pollution.
6. The national flower of India is \_\_\_\_\_.
7. \_\_\_\_\_ is the national fruit.
8. Green colour in our national flag stands for \_\_\_\_\_.

**Q2. Match the following. (6)**

Column A	Column B
An apple a day keeps the doctor away	Australia
Harry Potter	Listen carefully before speaking
Smallest continent	astronaut
The Adventures of Tom Sawyer	Eating an apple every day keeps you healthy
Be swift to hear and slow to speak	J.K.Rowling
One who travels in space	Mark Twain

**Ans. Column A**

**Column B**

\_\_\_\_\_  
\_\_\_\_\_  
\_\_\_\_\_  
\_\_\_\_\_  
\_\_\_\_\_

\_\_\_\_\_  
\_\_\_\_\_  
\_\_\_\_\_  
\_\_\_\_\_  
\_\_\_\_\_





