

ST MICHAEL'S SR. SEC. SCHOOL

MODEL QUESTION PAPERS

(2022-23)

CLASS 4 ENGLISH

MM-35

This question paper consists of two sections. Section A is Literature and Section B is Grammar. Both the sections are compulsory.

Section A

Q1. Dictation (3)

Q2. Answer the following questions. Do any 3 (6)

1. Which is the most important festival of Kerala? Explain the scenic beauty of Kerala.
2. How are the preparations for Onam done?
3. What was the real name of Mother Teresa? When was she born? What kind of person was she?
4. Why did Agnes go to India?
5. How did Helen become blind and deaf?
6. How did Helen understand for the first time 'water'?

Q3. Give the meanings of any 4 of the following words. (2)

1. dumb
2. raised
3. miserable
4. slum
5. orphan
6. tender

Q4. Fill in the blanks. (2)

1. In 1950, Mother Teresa founded the _____.
2. When Helen was nearly six years old, her father was _____ about a clever _____.

Q4. Make suitable sentences with any 2 of the following words. (2)

1. deaf
2. anger
3. lecturer
4. suffer
5. selfless

Section B

Q6. Fill in the blanks with suitable prepositions. (2)

1. Children are hiding _____ the trees.
2. Take care _____ your health.
3. The boys are running _____ each other.
4. He jumped _____ the pool.

Q7. Fill in the blanks with suitable conjunctions. (2)

1. Is your brother older _____ younger than you?
2. I like flowers _____ they are colourful.
3. My father watched television _____ I did my homework.
4. Mary wanted to go with us _____ her mother refused.

Q8. Underline the adverbs in the following sentences and mention their kind. (4)

1. He always comes late.
2. She promised to finish the work today.
3. The boy lives here.
4. The soldiers fought bravely.

Q9. Fill in the blanks with suitable verbs. (1)

1. The moon _____ at night.
2. The baby _____ in his room.

Q10. Write two action words which are connected to the following. (2)

1. girl
2. cat

Q11. Fill in the blanks with suitable pronouns. (2)

1. My name is Sanjeev. _____ am nine years old.
2. My mother is a housewife. _____ cooks tasty food.
3. Rita dressed _____ for the party.
4. He bought a new car. This car is _____.

Q12. Fill in the blanks with the simple present tense of the verb given in brackets. (1)

1. The peon _____ the bell. (ring)
2. The children _____ on the stage. (dance)

Q13. Fill in the blanks with the simple past tense of the verb given in brackets. (2)

1. Ravi _____ a letter to his best friend. (write)
2. I _____ my grandmother last week. (visit)

Q14. Fill in the blanks with the present continuous tense of the verb given in brackets. (1)

1. My sister _____ a picture. (paint)
2. The people _____ with each other. (fight)

Q15. Look at the following picture carefully and write a short paragraph on it. (3)



CLASS 4 EVS
MODEL PAPER

MM- 40

Q1. Answer the following questions briefly. Do any 6. (12)

1. Describe a multi-storeyed apartment.
2. What is a slum?
3. Differentiate between surface water and ground water.
4. How can we conserve water resources? Write any 4 ways.
5. What is the difference between mantle and core?
6. Give two examples of animals who help each other.
7. Why do animals live alone?
8. Name any five things that are written on the front side of an Indian currency note.
9. Why is open dumping harmful for the environment?
10. How does a clean environment help us?

Q2. Fill in the blanks. (8)

1. _____ is a process of burning waste in a controlled way.
2. A _____ is an animal that hunts and eats other animals.
3. _____ has very small ears which help them to retain their body heat.
4. The body covering of a _____ is sand coloured.
5. In the olden times, _____ were commonly used for travelling long distances in less time as they are stronger and faster.
6. The _____ bird builds its nest by stitching leaves together with plant fibre and other materials.
7. Hens live in a _____.
8. _____ is the main source of water on Earth.
9. _____ is the process in which water is first converted into water vapour, then cooled off to collect the purified water.
10. Some rivers and lakes overflow their banks and cause _____.
11. Water that is suitable for drinking is called _____ water.
12. The changing of water vapour into water on cooling is called _____.
13. Water vapour in the air is the _____ state of water.
14. _____ is the smallest continent.
15. The _____ separates North America and South America.
16. A _____ is biodegradable.

Q3. Answer the following questions in detail. Do any 2. (6)

1. Explain why waste management is important.
2. List any three advantages of animals living in groups versus animals living alone.
3. What is the difference between seasonal rivers and perennial rivers?

4. Distinguish between biodegradable and non- biodegradable waste.

Q4. State whether the following statements are True or False. (4)

1. A dog is called the ship of the desert.
2. The currency of Pakistan is the Indian rupee.
3. Dolphins and sharks are aquatic animals.
4. Cows are wild animals.
5. The changing of water into water vapour due to heat is called evaporation.
6. The Southern ocean is the fourth largest ocean.
7. The Atlantic Ocean is 'S' shaped.
8. A paper napkin is biodegradable.

Q5. Write the currency of the following countries. (2)

- a. UAE
- b. UK
- c. Bangladesh
- d. Pakistan

Q6. Draw a diagram to show the climatic zones on the Earth. (2)

Q7. Choose the correct answer. (2)

- a. _____ is not a source of freshwater.
1. river 2. stream 3. sea 4. pond
- b. A carriage drawn by a horse is called a _____ in India.
1. tempo 2. tonga 3. rickshaw 4. auto
- c. The _____ Zone is also called the Tropical zone.
1. Frigid 2. Torrid 3. Temperate
- d. _____ can decompose in a compost pit.
1. construction waste 2. fruit peels 3. glass jars

Q8. Mark the following on a world map. (4)

1. Atlantic Ocean
2. North America
3. Australia
4. Indian Ocean

**CLASS 4 MATHS
MODEL PAPER**

MM 40

Q1 MENTAL MATHS

(5)

1) $16 \times 8 =$ _____

2) $17 \times 5 =$ _____

3) $15 \times 6 =$ _____

4) $17 \times 9 =$ _____

5) $14 \times 7 =$ _____

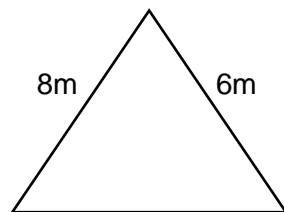
6) PUT $>$, $<$ OR $=$ 0.854 _____ 0.97

51.2 _____ 5.12

7) How many times can $\frac{1}{2}$ Litre of milk be poured in in a vessel of capacity 2litres.

8) $12000 \text{ mm} =$ _____ m

9)



find the third side if perimeter is 26 m.

Q2 FIND :

(1X7=7)

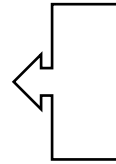
1) Complete the pattern: 8.94 8.95 8.96 _____ _____

2) Convert the following decimal into fraction: a) 6.308 b) 0.256

3) Write two equivalent fractions of $0.8 =$ _____ $=$ _____

4) Arrange 61.2 6.12 2.16 0.216 0.61 in descending order.

5) Complete the drawing by making symmetrical half.



6) Draw the mirror reflection of :



7) Use the code to decode :

23 5

1 18 5

15 14 5

Q3 Solve:

(2x3=6)

1) Convert into decimal:

a) $\frac{81}{1000}$

b) $43 \frac{42}{100}$

2) Solve:
$$\begin{array}{r} 0.55 \\ + 0.8 \\ \hline \hline \end{array}$$

$$\begin{array}{r} 9.7 \\ - 6.8 \\ \hline \hline \end{array}$$

3) Solve any 2

Add 12m 31cm + 163m 5 cm + 90m 25cm

Subtract 586 km 540m from 686 km

Divide 750 m by 3

Q4 Find the perimeter of rectangle whose length is 25m and breadth is 20m. (1.5)

Q5 Find the perimeter of a square whose side is 20 m. (1.5)

Q6 Write as decimal : (3)

a) Seven hundredths _____

b) $50 + 7 + \frac{4}{100}$ _____

c) $\frac{6}{10} + \frac{9}{1000}$ _____

Q7 Convert the following: (Do any 4)

(1x4=4)

a) 6050 mm into cm and mm

b) $8\frac{1}{2}$ cm into mm

c) 4550 m into km and m

d) 6 km 5 m into m

e) 35 mm into cm

f) 75100 g into kg and g

g) 12 kg 55 g into g

Q8 Problem sums :

1) Mr Sharma covers 4 rounds of a square park whose side is 250 m . How much distance does he covers. Find in metre and kilometre. (2.5)

2) Suchi got 5 kg of rice. Of Which she used 3 kg 125 g . How much quantity of rice is left? (2.5)

3) Neetu has 4.5 m of red ribbon and 3.75 m of green ribbon. How much total ribbon she has? (2)




Q9 DATA HANDLING:

The following pictograph shows the fruits liked by different students .



= 20 students

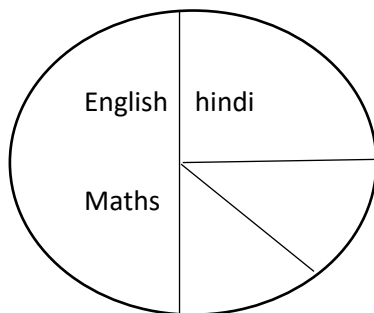
bananas	
---------	--

mangoes	
Grapes	
oranges	

Answer the following questions:(3)

- 1) How many students liked oranges?
- 2) How many students liked bananas?
- 3) Which fruit is least liked the students?
- 4) How many more students like oranges than mangoes?

Q10 Read the pie chart and answer the questions: (2)



IF the total number of students are 400, some students liked English, some liked MATHS, some liked hindi and rest of the students liked Science.

Find the number of students liked English?

Find the number of students liked EVS?

CLASS 4 HINDI
MODEL PAPER

1. श्रुतलेख:

2. निम्नलिखित शब्दों के अर्थ लिखो:.

मुद्रा

भंगिमा

सुखद

सज्जित

सार्वजनिक

संगठन

उत्तरदायित्व

कचोट

भिशती

3. निम्नलिखित प्रश्नों के उत्तर दिजिए:

क. अध्यापिका ने बच्चों को किस समारोह के बारे में बताया।

ख. मुखौटे कैसे बनाए जाते हैं?

ग. कथक नृत्य का जन्म कहां हुआ।

घ. श्री धरण के चरित्र की प्रमुख विशेषताएं लिखिए।

च. श्री धरण का जन्म कब और कहां हुआ था ?

छ. चिमटा देखकर दादी को क्रोध क्यों आया ?

ज. नमाज़ खत्म होने पर लोगो ने क्या किया?

4.वाक्य बनाओ : वातावरण,गतिमान, सम्मानित, कार्यशैली

व्याकरण

1.निम्नलिखित शब्दों के दो दो पर्यायवाची शब्द लिखो:

बादल

रात

वर्षा

गंगा

2.निम्नलिखित शब्दों के विलोम शब्द लिखो:

राजा

पवित्र

मौखिक

प्रत्यक्ष

उपकार

ऊंचा

आलसी

मित्र

3.निम्नलिखित शब्दों के समरूप भीनार्थक शब्द लिखें:

बाहर

बहार

समान

सम्मान

मूल्य

मूल

नीर

नीड

4. निम्नलिखित वाक्यांशों के लिए एक शब्द:

बोलने वाला

साथ में पड़ने वाला

सदा सच बोलने वाला

दस वर्षों का समूह

जो गिना ना जा सके

केवल फल खाने वाला

5. निम्नलिखित शब्दों को शुद्ध करके लिखें:

परकार

चलाक

धियान

दिवार

सुरज

6. निम्नलिखित मुहावरों के अर्थ लिखकर वाक्य बनाए:

दांत पीसना

कान खा जाना

आंखें खुलना

पीठ ठोकना

7. वीर बालक कहानी अपने शब्दों में लिखें:

CLASS 4 COMPUTER

MODEL PAPER

Q1. Fill in the blanks:

1. The first page of the website is called
2. ,..... are used to open websites.
3. is a network of computers and devices.
4.skills are improved by picture puzzle.
5.is a location or position.
6. In the year.....LISP was created .

Q2. Write the names of any 3 web browsers?

Q3. Draw and write names of any three search engines.

Q4. Write answers of the following questions:

1. What is an ISP? Give any two examples of ISPs.
2. What is Microsoft edge? Write any three parts of Microsoft Edge.
3. What is a compass?
4. What is AI?
5. Who is Sophia?
6. What is Roomba?

Q5. Write true or false for the following statement:

1. Asimo was the first ever robot to get the citizenship of a country.
2. Kismet was developed in year 2000.
3. Roomba is a robot used for space exploration.
4. The internet and the world wide web are the same
5. The unique address of each web page or website is called HTP.
6. Yahoo was initially called 'Tom'.

Moral Science
Class IV

MM: 25

Q.1 Question Answers:

2x5=10

Marks

a) What did Mohan do to convince parents and children?

b) How did the new plan help him?

c) What are the simple steps to create a great first impression?

d) Write any two things that makes you happy?

e) Define good manners?

Q.2 Fill in the blanks:

1x5=5 Marks

a) Mohan was a _____ person.

b) The writer had _____ favorite sports.

c) Some students went to cities for higher _____.

d) Plan your time to do both studies and _____.

e) Parents thought that children could assist them in _____.

Q.3 Make the sentence:

2x3=6

Marks

a) Peace

b) Education

c) Transform

Q.3 Match the following:

1x4=4

Marks

A	B
1) Each one	a) Anxiety
2) Stress	b) Development
3) Personality	c) Life
4) Balanced	d) Teach one

CLASS 4 GK
MODEL PAPER

M.M=25

1.Fill in the blanks

(5)

- a) Undefined, healthy food that does not contain artificial substance are called _____ food.
- b) Food that can be eaten but is bad for health _____
- c) _____ River is situated near city Guwahati
- d) Sundarbans Tiger reserve is located in _____ State
- e) _____ City is located on the bank of river Hooghly

2. MULTIPLE CHOICE QUESTION

(5)

- You should hold the hand of your elder while:
- a) Studying at home
 - b) watching the TV at home
 - c) crossing a street
 - d) dancing

National Park located in Uttarakhand:

- a) Gir Forest
- b) Chandra Prabha sanctuary
- c) Kaziranga national Park
- d) Jim Corbet national Park

Germany is located on the banks of river:

- a) Rhine
- b) Indus
- c) Ravi
- d) Hooghly

Which of the following is correct:

- a) eat junk food and regularly
- b) Drink 8 to 10 glasses of water every day
- c) don't watch TV for long hours continuously
- d) You should be physically fit

Dachigam Sanctuary is located is:

- a) Uttarakhand
- b) Himachal Pradesh
- c) Karnataka
- d) Jammu & Kashmir

3. STATE TRUE OR FALSE

(5)

- 1) Yamuna is located in Agra _____
- 2) Sanjay Gandhi National Park is situated in Assam _____
- 3) We should include fruits and salad in our diet _____
- 4) river Mahanadi situated in Kolkata _____
- 5) Jim Corbett National Park in Uttarakhand is named after the famous hunter and naturalist Jim Corbett _____

4. Match the following

(5)

- 1. shellfish and sea creature that can be eaten (___) (a) Nashik

2. Ice creams, chips and soft drinks (___)

(b) Srinagar

3. Gir forest (___)

(c) seafood

4. Jhelum river (___)

(d) junk food

5. Godavari river (___)

(e) Gujarat

5. Answer the following

(5)

1. Sitting close to the TV is harmful for you?

2. Sukkar city is located in which country?

3. Name the state where Kaziranga national state that located?

4. Cairo is situated on the bank of river?

5. Paris is city located in which country?
